



**ATOMIC ENERGY CENTRAL SCHOOL No.-4, RAWATBHATA**

**Periodic Test – II (2018-19)**

**Subject : English**

**Class – V**

**Section : \_\_\_\_\_**

**Date: 08/01/2019**

**Name of the student : \_\_\_\_\_**

**Roll No: \_\_\_\_\_**

**Invigilator's sign: \_\_\_\_\_**

**Time - 1½ Hours**

**Examiner's sign: \_\_\_\_\_**

**MM : 40 MO : \_\_\_\_\_**

Q.1) Write the word meaning of following words. 4

1. Chatter \_\_\_\_\_
2. Hastily \_\_\_\_\_
3. Topsy- turvy \_\_\_\_\_
4. Sailor \_\_\_\_\_

Q. 2) Fill in the blank. 5

1. \_\_\_\_\_ was quiet one in the class.
2. The barber had \_\_\_\_\_ brothers.
3. "Give him three pieces of \_\_\_\_\_", 'said sultan'
4. The front-door step is at the \_\_\_\_\_ in topsy-turvy land.
5. The captain sent the men to the land in search of \_\_\_\_\_.

Q. 3) Answer the following questions. 6

1. Why Jane was quite in class?

---

---

2. Why did barber want a lot of food?

---

---

3. Did Sultan enjoy barber's talk? Why do you say so?

---

---

4. When do the children go to school in Topsy-turvy land?

---

---

5. What is autobiography?

---

---

6. Why did the men rush back to the ship?

---

---

Q. 4) Write sentence using given words about your friend.

2

[ sharing, studious, quiet, friendly]

---

---

---

---

Q. 5) Write the opposites of the following words using un-, im-, dis- .

3

1. Believe \_\_\_\_\_

2 polite \_\_\_\_\_

3. Pure \_\_\_\_\_

4. Satisfy \_\_\_\_\_

5. Obedient \_\_\_\_\_

6. Shaved \_\_\_\_\_

Q. 6) Write notice for periodic test – 2 examinations of your school, use following clues. 4

[ name of school, heading, subject, date, time, name of I/C teacher, name of notice issuing authority]

---

---

---

---

---

---

---

---

---

---

---

---

---

---

---

---

---

---

---

---

---

---

---

---

Q. 7) use following joining words and complete the sentence. 4

[ or, as, till, but, if ]

1. The market was closed \_\_\_\_\_ it was a holiday.
2. Will you have tea \_\_\_\_\_ coffee?
3. She waited \_\_\_\_\_ the train arrived.
4. He drove the car \_\_\_\_\_ I listened to music.

Q. 8) Describe the processes of sending an e-mail. 2

---

---

---

---

---

---

---

---

---

---

---

---

---

---

---

---

---

---

---

---

---

---

---

---

Q. 9) Write four things that you do at home to make your home look neat and clean.

4

---

---

---

---

---

---

---

---

Q. 10) Add -er , -est, most, more to the describing words.

2

- 1. Wet \_\_\_\_\_
- 2. Difficult \_\_\_\_\_
- 3. Lovely \_\_\_\_\_
- 4. Heavy \_\_\_\_\_

Q.11 Punctuate the following passage and rewrite it.

4

dear samir,

i am sending you a photograph of my newest pet frisky is a bulldog and a very playful puppy by next summer he should be old enough to go with us on our long walks i m sure you are looking forward to seeing him I know you will like him  
warm regards sanju

---

---

---


---

---

---

---

---



परमाणु ऊर्जा केंद्रीय विद्यालय क्र. - 4, रावतभाटा

द्वितीय सामयिक परीक्षा (2018-19)

विषय : हिन्दी

कक्षा – पाँचवीं

अनुभाग : \_\_\_\_\_

दिनांक : 09/01/2019

विद्यार्थी का नाम : \_\_\_\_\_

अनुक्रमांक : \_\_\_\_\_

निरीक्षक के हस्ताक्षर : \_\_\_\_\_

समय : 90 मिनट

परीक्षक के हस्ताक्षर : \_\_\_\_\_

पूर्णांक : 40 प्राप्तांक : \_\_\_\_\_

1 – समान अर्थवाले शब्द लिखो -

3

पाबंदी \_\_\_\_\_

यकीन \_\_\_\_\_

अनबूझ \_\_\_\_\_

ऊलजलूल \_\_\_\_\_

महूरत \_\_\_\_\_

मामूली \_\_\_\_\_

2 - नीचे लिखे देशों की मुद्राएँ लिखो -

3

भारत \_\_\_\_\_

सऊदीअरब \_\_\_\_\_

जापान \_\_\_\_\_

इंग्लैंड \_\_\_\_\_

इटली \_\_\_\_\_

बांग्लादेश \_\_\_\_\_

3 - नीचे लिखे शब्दों का वाक्यों में इस्तेमाल करो -

3

रूखा स्वर \_\_\_\_\_

खूँखार डाकू \_\_\_\_\_

ऊलजलूल कल्पना \_\_\_\_\_

4- सही कारक चिह्न चुनकर खाली जगह भरो -

2

का के की में ने से आदि

कोको-----माँ ने कल दुकान -----एक फूलदान खरीदा था ।

आज-----सपने-----जितनी बारिश हुई , उतनी कभी नहीं ।

5- एक शब्द में उत्तर लिखो -

10

0 नाटक में हिस्सा लेनेवाले को क्या कहते हैं?-----

0 नाटक में जिनकी भूमिका महत्वपूर्ण होती है उसे क्या कहते हैं?

-----

0 नाटक में जिनकी भूमिका महत्वपूर्ण नहीं होती है उसे क्या कहते हैं?

-----

0 उ बा तुन चाचा किस रंग का फूलदान लाए थे?-----

0 अम्मी के अधिकार किसने छीन लिए थे? -----

0 भारी बारिश का क्या मतलब होता है?-----

0 अँधेर नगरी का राजा कैसा था ? -----

0 दादी अपने बक्से में क्या रखती थीं?-----

0 सिक्के किस धातु के बने होते हैं ? -----

0 मुर्गी के बच्चे को क्या कहते हैं ? -----

6-जिन शब्दों के नीचे रेखा खिंची हैं उनको आजकल कैसे लिखते हैं- 2

0 न जाने अँधेर हो कौन छन में । -----

0 गुरु ने कहा तेज ग्वालिन न भग री । -----

0 इसी से गिरी यह न मोटी घनी थी । -----

0 ये गलती न मेरी, यह गलती बिरानी । -----

7- उचित शब्द चुनकर वाक्य पूरे करो - 2

चकाचक चटपट फटाफट पटापट

0 आँधी के कारण पेड़ से ----- फल गिरने लगे ।

0 हंसा अपना सारा काम ----- कर लेती है ।

0 उस भुक्खड़ ने ----- सारे लड्डू खा डाले ।

0 सारे बर्तन धुलकर ----- हो गए ।

8 - स्वामी की दादी के बारे में 5 वाक्य लिखो - 5

-----

-----

-----

-----

-----

9 - नीचे लिखे प्रश्नों के उत्तर लिखो -

0 अब्बा ने क्या सोचकर आरिफ की बात मान ली ?

2

उत्तर -----  
-----

0 कोको के माता - पिता कहाँ गए हुए थे ?

2

उत्तर -----  
-----

0 अँधेर नगरी की प्रजा राजा के मरने पर खुश क्यों हुई ?

2

उत्तर -----  
-----

0 मैडल से चूड़ियाँ बनवा लेने पर दादी ने बुआको महामूर्ख क्यों माना?

2

उत्तर -----  
-----


0 स्वामी ने राजम को ऊँची चीज माना । क्या तुम स्वामी की राय से सहमत हो, अपने उत्तर का कारण लिखो ?

2

उत्तर -----  
-----

समाप्त





**ATOMIC ENERGY CENTRAL SCHOOL No.-4, RAWATBHATA**  
**Periodic Test – II (2018-19)**

**Subject : Maths**

**Class – V**                      **Section : \_\_\_\_\_**

**Date: 10/01/2019**

**Name of the student : \_\_\_\_\_**

**Roll No: \_\_\_\_\_**

**Invigilator's sign: \_\_\_\_\_**

**Time -  $1\frac{1}{2}$  Hours**

**Examiner's sign: \_\_\_\_\_**

**MM : 40 MO : \_\_\_\_\_**

**Q I. Choose the correct answer and fill in the blanks.**                      (1/2 x10=5)

1. Srinagar and Punjab lies to the \_\_\_\_\_ of the country.  
a. East                      b. West                      c. North                      d. South
2. The distance between Jaodpur and Indore is 9 cm on map. The actual distance between them is \_\_\_\_\_.(scale 1cm = 150 km)  
a. 1450 km                      b. 1350 km                      c. 1600 km                      d. 1900 km
3. A dice has \_\_\_\_\_ faces.                      ( 4                      5                      6)
4. Two – tenth of a rupee = \_\_\_\_\_paise. ( 20                      30                      50 )
5. 1 metre = 1/1000 of a \_\_\_\_\_.  
a. km                      b. metre                      c. cm                      d. mm
6. By how much is 23°C greater than 16.4°C?  
a. 5.4°C                      b. 6.6°C                      c. 7.6°C                      d. 4°C
7. Rakhi needs 15 cm more to reach a height of 2m. Her present height is \_\_\_\_\_.  
a. 195 cm                      b. 215 cm                      c. 200 cm                      d. 185cm
8. Vaishali jumped 4.08 m in a long jump competition. She jumped 4 m and \_\_\_\_\_ cm.  
a. 80 cm                      b. 8cm                      d. 800 cm                      d. 40 cm
9. 7cm = \_\_\_\_\_mm.  
a. 700mm                      b. 70 mm                      c. 0.7                      d. 0.007
10.  $76/10 =$  \_\_\_\_\_ (decimal form)  
a. 0.0076                      b. 0.76                      c. 7.6                      d. 76.00

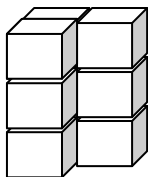
**Q2. Match the following.**                      (1 x5 =5)

- |                        |                                  |
|------------------------|----------------------------------|
| a. 1paise              | 1) 25 paise                      |
| b. 10/1000             | 2) 1/10 cm                       |
| c. rupee $\frac{1}{4}$ | 3) 50 paise                      |
| d. 1 mm                | 4) 1/100                         |
| e. rupee 1/2           | 5) one hundredth part of a rupee |

**Q3. Do as directed.**

(10)

**1. How many cubes are needed to make this model?**



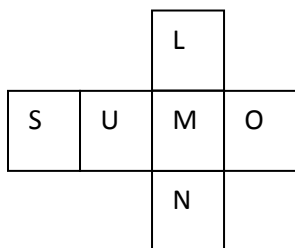
**Ans:** \_\_\_\_\_ cubes

**2. If 1 cm on the map shows 40 km on the ground, use the scale to find out:**

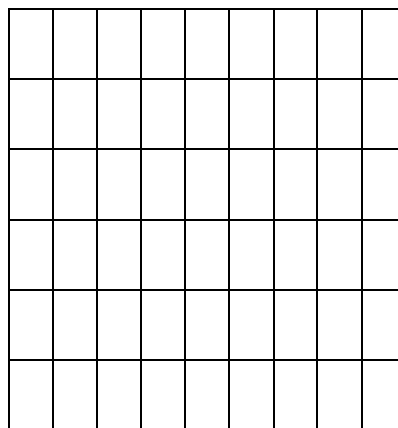
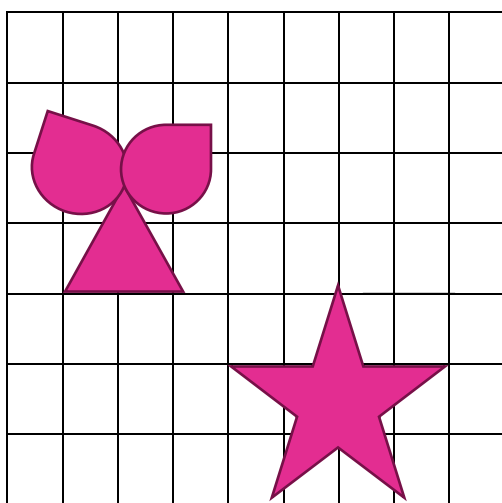
(i) \_\_\_\_\_ cm = 100 km

(ii) 20 cm = \_\_\_\_\_ km.

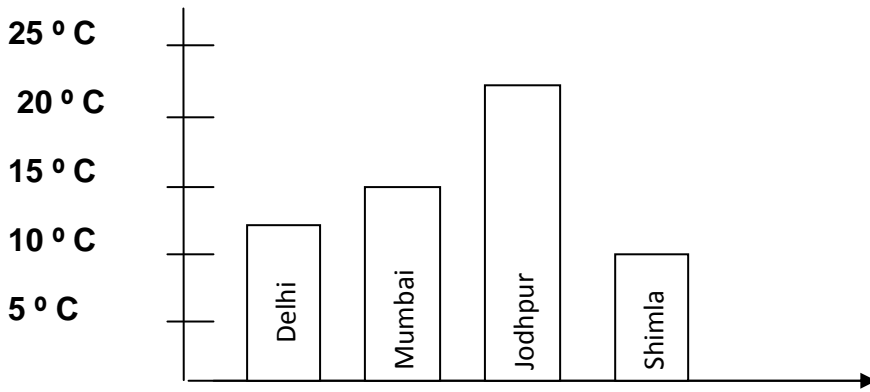
**3. The net of a cube is given. If this net is folded to make a cube in such a way that the letter O is at the bottom, then which letter will be on the top?**



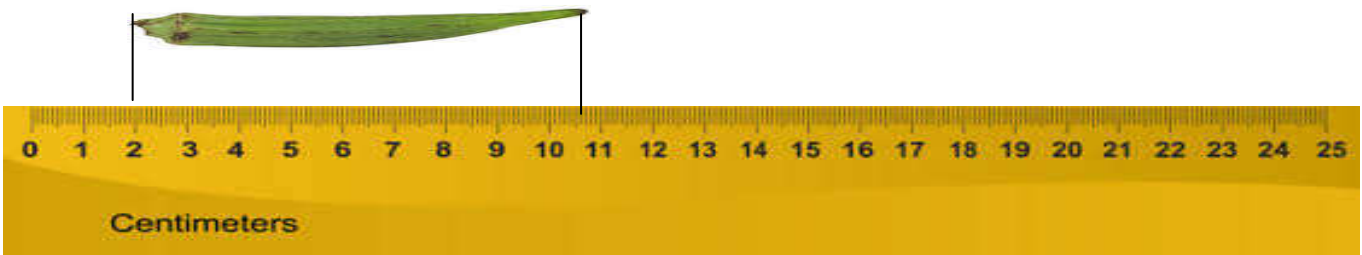
**4. Represent the same design in  $\frac{1}{2}$  cm grid.**



5. Carefully look at the figure. The hottest city is \_\_\_\_\_



6. The length of the lady finger is \_\_\_\_\_ cm.



7. Arun has to grow 38 cm. more to reach 2m.(200cm)height. What is Arun's height in centimeters?

8. Write the names of any two states that have sea on any one side.

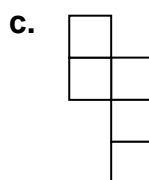
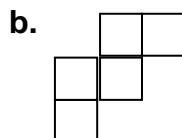
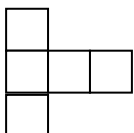
\_\_\_\_\_

9. Change the following into appropriate units.

a)  $85 \text{ km } 70 \text{ m} = \text{_____ km}$

b.  $0.8 \text{ cm} = \text{_____ mm}$

10. Which of these nets can be folded into an open box.



**Q4. Solve the following.**

**(2x8=16)**

a) Rate of Indian currency as compared with foreign currencies is as follows-

1 U.S Dollar= 43 Indian rupees

1 EURO= 65 Indian rupees

**Radha got 10 Euros from her father and 10 U.S dollar from her brother on her birthday. Find out how many Indian rupees did Radha get?**

b) Look at the price tag of the items given below.



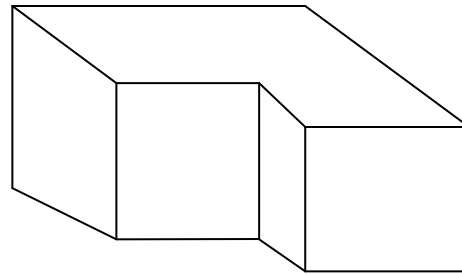
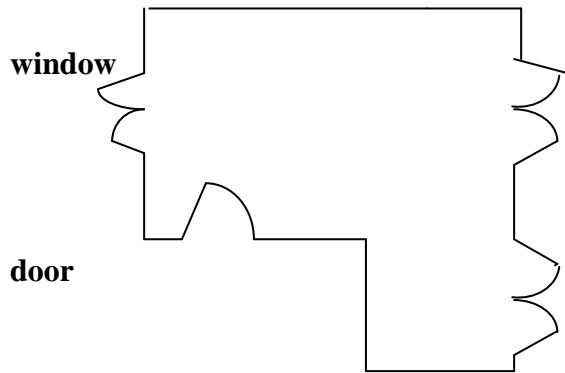
- How many balls can Ria buy for Rs. 196?
- A pen costs Rs 6.50. How much will 2 and a half dozen cost?

c. The distance between two places is 36 km on the ground. It is marked as 3 cm on a map. What is the scale of the map?

d. If 2 cm on a map = 1 km on ground, how many cm on the map will be equal to 9 km on the ground?

e. Draw the deep drawing of a cylinder.


f. Look at the floor map of a house. Make doors and windows on the deep drawing of this house.



g. Write in metres.

- 99 centimetre = \_\_\_\_\_ m
- 2 metre and 8 centimetre = \_\_\_\_\_ m

h. Make a nice design by colouring 0.65 part of this squared red.




**Q5. Look at the table given below and fill in the blanks. ( 1x4=4)**

**A.E.C.S N0.2 has its sports day. The first five children in the long jump are:**

<b>Name of the student</b>	<b>Long jump (in Metres)</b>
<b>Yogesh</b>	<b>2.90</b>
<b>Sarita</b>	<b>3.05</b>
<b>Anshika</b>	<b>4.50</b>
<b>Bhawana</b>	<b>2.75</b>
<b>Charu</b>	<b>3.50</b>

- a. \_\_\_\_\_ is the winner of the jump.
- b. Bhawana's jump is \_\_\_\_m\_\_\_\_cm.
- c. The difference between 2<sup>nd</sup> and 3<sup>rd</sup> winner is \_\_\_\_\_.
- d. Charu got \_\_\_\_\_ position in jump.



**ATOMIC ENERGY CENTRAL SCHOOL No.-4, RAWATBHATA**  
**Periodic Test – II (2018-19)**  
**Subject : EVS**

**Class – V**                      **Section : \_\_\_\_\_**                      **Date: 11/01/2019**  
**Name of the student : \_\_\_\_\_**                      **Roll No: \_\_\_\_\_**  
**Invigilator's sign: \_\_\_\_\_**                      **Time -  $1\frac{1}{2}$  Hours**  
**Examiner's sign: \_\_\_\_\_**                      **MM : 40 MO : \_\_\_\_\_**

---

- Q1. Fill in the blanks. ( 1×15=15)
- (a) .....Takes millions of year to be formed.(Petroleum, food)
- (b) in villages, ..... are still used as fuel in chulha for cooking.  
(Cow dung cakes, petrol)
- (c) In ....., some houses are made on mountains while some on water.  
(srinagar, Chandigarh)
- (d) changpas, big cone-shaped and tents are known as.....( rebo, leku )
- (e) Gaurav Jani travelled on his ..... from Delhi to Kashmir. (Flight, loner)
- (f) An area which is high dry and flat is called a..... (Desert, cold desert)
- (g) a place where sheeps and goats are kept is known as..... (lekha, lepu)
- (h) Shaking of earth cause an ..... (earthquake, flood)
- (i) On .....January ....., an earthquake affected the Kutch area of Gujarat.  
( 26 jan 2001, 26 jan 2002 )
- (j) No rain cause drought and scarcity of food cause.....(Famine, tsunami)
- (k) The woodcutter blew the hot potato too ..... (cool, more hotter)
- (l) An instrument which is used to hear the heartbeats and breathing of a person is called.....(stethoscope, violin)
- (m) Flute is a type of ..... instrument.(wind, tapping)
- (n) After India's freedom the constitution was prepared under the leadership of..... (Neta Ji Subhash chander bosh, baba saheb)
- (o) Gandhiji raised their voice against the..... (untouchability, leadership)

Q2 Name any two :.

(1×5)

(a) Two product that made of Petroleum

.....

(b) What problem can we have from smoke coming out of vehicles ?

.....

© Write two steps that how can we save ourselves and others from when earthquake come.

.....

.....

(d) Name two people that fight against untouchability in India.

.....

(e) Write down the damage of floods.

.....

.....

Q3 Answer the following question:

(2×5=10)

(a) Why are the prices of petrol and diesel going up ?

.....

.....

.....

.....



(b) What kind of problem will we face if the number of vehicle keep on increasing ?

.....

.....

.....

.....

© Why do people in leh eat dry fruits and vegetables ?

.....

.....

.....

.....

(d) why do the changpa graze their goats at higher and colder places ?

.....

.....

.....

.....

(e) what is earthquake ? how it is caused ?

.....

.....

.....

.....

