



ATOMIC ENERGY CENTRAL SCHOOL No.-4, RAWATBHATA

Periodic Test – II (2018-19)

Subject : English

Class – III

Section : _____

Date: 10/01/2019

Name of the student : _____

Roll No: _____

Invigilator's sign: _____

Time - 1 $\frac{1}{2}$ Hours

Examiner's sign: _____

MM : 40 MO : _____

Q. 1) Fill in the blank / complete the sentence. 5

1. Give me some _____ to eat. (food/cloths)
2. Let's get on the _____. (train/down)
3. The wheels on the bus go _____. (beep/ round)
4. The man was going to the _____. (city/village)
5. The tiger cub catches one night _____.(a frog/ a dog)

Q.2) Write where these animals/birds live, chose from following given words. 5

[hive, ant hill, pond, den, burrow, web, nest]

1. A bee _____
2. A duck _____
3. A sparrow _____
4. A spider _____
5. A tiger _____

Q.3) Answer the following questions in short. 5

1. Where do the trains run?

2. What is the vegetable man selling?

3. Who is the 'I' in the poem?(Puppy and I)

4. Where did the mother tiger and her small tiger cub live?

5. Write the names of following animal's youngone.

a) Dog = _____ b) Cat = _____

Q.4) Write different means of transport into correct group.

3

Land

Air

Water

_____	_____	_____
_____	_____	_____
_____	_____	_____

Q. 5) Write word meaning of the followings.

4

1. dusk = _____

2. wide awake = _____

3. hay = _____

4. harsh = _____

Q. 6) Who am I? (Use the following clues and write the name) 3

1. I carry loads. _____

2. I am man's best friend. _____

3. I lay eggs. _____

Q. 7) Write the names of four domestic and wild animals from given clues. 4

[dog, cow, fox, tiger, goat, bear, sheep, jackal]

Domestic animals

Wild animals

Q.8) Add '-ing' to the following words. 2

1. Join = _____

2. Play = _____

3. Dance = _____

4. Jump = _____

Q. 9) Match the animals with their sounds. 2

A

B

1. a horse

a. mews

2. a sheep

b. neighs

3. a cat

c. moos

4. cow

d. bleats

Q. 10) use 'can' and 'cannot' alternatively in the following sentences.

3

1. I _____ hear the sound of car.

2. I _____ hear the train whistle.

3. I _____ hear the wind blow.

4. I _____ hear the clock.

5. I _____ hear the sound of feet.

6 I _____ hear the sound of moving chairs.

Q. 11) look at the picture and write four sentences about what you see.


4



परमाणु ऊर्जा केंद्रीय विद्यालय क्र. - 4, रावतभाटा

द्वितीय सामयिक परीक्षा (2018-19)

विषय : हिन्दी



कक्षा – तीसरी

अनुभाग : _____

दिनांक : 11/01/2019

विद्यार्थी का नाम : _____

अनुक्रमांक : _____

निरीक्षक के हस्ताक्षर : _____

समय : 90 मिनट

परीक्षक के हस्ताक्षर : _____

पूर्णांक : 40 प्राप्तांक : _____

1 - सही जोड़े को मिलाओ -

2

प्रशंसा	जलन
ईर्ष्या	बिल्कुल
कतई	अवश्य
जरूर	तारीफ

2 - तुम्हें किन-किन चीज़ों की महक आती है जो खाने से जुड़ी न हो। किन्हीं चार के नाम लिखो -(जैसे - सबुन)

2

3 - उदाहरण के अनुसार लिखो-

2

जैसे - साफ़ - सफ़ाई

रंग ----- चढ़ -----
बुन ----- पढ़ -----

4 -जिन शब्दों के नीचे रेखा खिंची हैं, उनका मतलब लिखो-

2

0 सेठ अवंती का मंसूबा भाँप गया ।

0 मैं तुम्हारे हुनर देखना चाहता हूँ।

0 सेठ बुलंद आवाज में बोला ।

0 रंग के बारे में मेरी कोई खास पसंद तो है नहीं ।

5 - उदाहरण के अनुसार सही जोड़े बनाओ-
जैसे - दिन - दीन

2

6 - नीचे लिखे वाक्यों में से फालतू शब्द ढूँढ़कर लिखो -

2

0 बाज़ार से हरा धनिया पत्ता भी ले आना ।

0 एक पीला पका पपीता काट लो ।

0 मीरा बगीचे से दो ताजे नींबू तोड़ लो ।

0 बेकार की फालतू बात मत करो ।

7 - रोटी कैसे बनेगी ? सही क्रम में लिखो -

3

आटे को सानेंगे, गेहूँ को पिसवाएँगे, आग पर फुलाएँगे,
तवे पर पकाएँगे, चकले पर बेलेंगे, गरम - गरम खाएँगे ।

1- -----

2- -----

3- -----

4- -----

5- -----

6- -----

8 - इन कामों के लिए तुम कहाँ जाते हो ?

2

0 बाल कटवाने -----

0 सुराही खरीदने -----

0 दूध खरीदने -----

0 पंचर बनवाने -----

9- रोटी के चार नाम लिखो - 2

10 - नीचे लिखे वाक्यों को आगे-पीछे करके लिखो- 2

0 उसी खोज में मैं भी निकली ।

मैं भी-----

0 रखी मेज पर है वो रोटी ।

वो रोटी-----

11 - इन लोगों से मिलने पर तुम इन्हें क्या कहते हो ? 2

0 तुम्हारे शिक्षक -----

0 तुम्हारे दादी-नानी -----

12 - हलवा बनाने के लिए क्या-क्या करना पड़ता है ? 2

13 - अवंती के बारे में पाँच वाक्य लिखो - 5

14 - प्रश्नों के उत्तर लिखो -

0 दोनों बिल्लियों के बीच झगड़े की जड़ क्या थी ?

2

उत्तर

0 सेठ ने किस रंग में कपड़ा रंगने को कहा ?

2

उत्तर

0 अवंती कपड़ा अलमारी में बंद कर दिया क्यों ?

2

उत्तर

0 गुरुजी थैली में क्या लिए जा रहे थे ?

2


उत्तर

0 शिवदास ने गुरुजी की थैली देखकर अपनी गाड़ी क्यों दे दी?

2

उत्तर

समाप्त



ATOMIC ENERGY CENTRAL SCHOOL No.-4, RAWATBHATA

Periodic Test – II (2018-19)

Subject : Maths

Class – III

Section : _____

Date: 08/01/2019

Name of the student : _____

Roll No: _____

Invigilator's sign: _____

Time - $1\frac{1}{2}$ Hours

Examiner's sign: _____

MM : 40 MO : _____

Q.1 a) How many months does a year have?

4

b) How many days does the month of February have?

c) How many days makes a week?

d) How many weeks are there in July?

Q.2) complete the following :

5

a) $9 \times 5 =$ _____

b) $12 \times 8 =$ _____

c) $7 \times 9 =$ _____

Q.3) Name two activities that take seconds to complete.

2

Q.4) use box method to solve multiplication -

5

a) 22×4

b) 38×4

Q.5) Fill in the blanks -

5

a) light things are measured in _____

b) heavy things are measured in _____

c) one kilogram = _____ grams

d) one hour = _____ minutes

e) one leap year = _____ days

Q.6) tick the one for which you need a bigger bag :

2

c) 2 kg of cotton _____ or 3 kg of iron _____

d) 3 kg of ice cubes _____ or 3 kg of popcorns _____

Q.7) complete the boxes-

2

b) 2×6 is ___ times ___ or ___ + ___

c) 3×7 is ___ times 7 or ___ + ___ + ___

Q.8) Rohan bought 6 packets of pens. Each packet has 3 pens.
How many pens did Rohan buy? 2

Q.9) There are 11 desks in a classroom. Each desk has 4 legs. How
many total number of legs? 2

Q.10) Look at the patterns and complete them.

3

a) 4, 8, 12, ____, ____, ____

b) 11, 22, 33, ____, ____, ____

c) 12, 24, 36, ____, ____, ____

Q.11) Complete the following :

3

a) ___ \times 8 = 56

b) $7 \times 11 =$ ___


IV. Look at the birth certificate of Sindhura and answer the following questions.

5

Form Number 10


Government of Andhra Pradesh

★ Birth certificate



This is to certify that this information is taken from the original record of birth which is in the register for the year 2004 of Kothagudem Municipality.

Name:	Siripurapu Sindhura
Sex:	Female
Date of birth:	10- 04- 2004(Tenth April, Two Thousand Four)
Name of Father:	S. Venkatachalam
Name of Mother:	S. Latha
Date of registration:	10- 04- 2004
Registration Number:	1001/04



Date: 15-05-2004 Signature of issuing authority

- a) 10-04-2004 shows that Sindhura was born on 10th _____ in the year 2004.
- b) How old will Sindhura be on 10th April, 2012? _____
- d) On what date will she be ten years old? Write in numbers. _____
- e) How many months old was Sindhura on 10th July, 2004? _____
- h) What is the registration number of her certificate? _____



ATOMIC ENERGY CENTRAL SCHOOL No.-4, RAWATBHATA

Periodic Test – II (2018-19)

Subject : EVS

Class – III

Section : _____

Date: 09/01/2019

Name of the student : _____

Roll No: _____

Invigilator's sign: _____

Time - 1 $\frac{1}{2}$ Hours

Examiner's sign: _____

MM : 40 MO : _____

Q.1 What are these workers called? 3

- One who repairs cars and scooters - Mechanic
- One who teaches in school - _____
- One who brings letters - _____
- One who makes pot - _____

Q.2 What do you take when you- 2

- Have cough and cold - _____
- Get hurt - _____

Q.3 Write the name of the games in the given space. 2

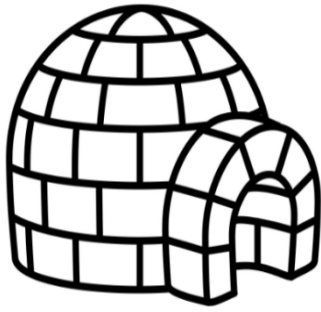
- It has no wings, but can fly,
High, high up in the sky. - _____
- Fours and sixes if you can get,
A century is sure, I can bet. - _____


Q.4 Match the following. 2

- | | |
|----------------|----------------------|
| Braille script | a sparrow |
| Hospital | six dots |
| Phudgudi | indoor game |
| Carrom | treatment of patient |

Q.5 Name the pictures.

4





Q.6 Fill in the blanks.

4

- Ravi Bhaiya carries a _____ (black / white) stick when he goes out.
- Bhanate want a _____ (trowel / towel) to dig the clay.
- New Delhi is the capital of _____ (India / Rajasthan).
- Deepali's father sells _____ (clothes / vegetables)

Q.7 Write true or false.

3

- Champa was sitting with her basket full of flowers. _____
- We get turmeric from animals. _____
- Thick walls are plastered with mud in Rajasthan. _____

Q.8 Circle the odd one.

3

- | | | | |
|-----------|----------|---------|-------------|
| 1. Chess | Ludo | Carrrom | Football |
| 2. Potato | Milk | Spinach | Onion |
| 3. Bank | postcard | stamp | post office |

Q.9 Give two examples.

4

- Temporary houses - _____
- Things we do in school - _____

Q.10 Answer in one word.

4

- A Special drink of Kashmir _____
- A game played with small coloured glass balls _____
- The game which you like the most _____
- Name the national game of India _____

Q.11 Arrange the steps of pot making in order

2

- | | |
|---|--------------------------|
| 1. Mix the clay with water. | <input type="checkbox"/> |
| 2. Dig the clay with trowel. | <input type="checkbox"/> |
| 3. Dry the pots in the sun or kiln. | <input type="checkbox"/> |
| 4. Shape the pot in the potter's wheel. | <input type="checkbox"/> |

Q.12 Write the answer in one or two sentences.

4

1) Who invented Braille script?

2) Who all helped the crow to make the pot?

Q.13 Draw a letter box and colour it.

3