



ATOMIC ENERGY CENTRAL SCHOOL No.-4, RAWATBHATA

Periodic Test – 2 (2019-20)

Subject : English

Class – V

Section : _____

Date: 10/01/2020

Name of the student : _____

Roll No: _____

Invigilator's sign: _____

Time - 1 $\frac{1}{2}$ Hours

Examiner's sign: _____

MM : 40 MO : _____

1. Read the passage given below and answer the following questions: [5X1=5]

Tobacco kills at least three million people each year world wide. In India tobacco smoking and chewing have become a habit within estimated 850 millions of the population. India has the largest number of mouth cancer cases in the world, due to chewing of tobacco. Smoking causes Lung cancer diseases.

Every year on october11 No -Tobacco Day is being observed with a view to discourage the use of tobacco and to encourage people to take appropriate care before it is too late.

a) How many people die due to tobacco?

b) What type of diseases does smoking cause?

c) Which day is celebrated as No Tobacco Day?

d) Write the opposite of Courage from the passage. _____

e) Write a verb from the passage _____

2. Use the clues in the box to describe the nature of your best friend. [4]

friendly	studious	helpful	regular	kind
----------	----------	---------	---------	------

3. Answer the following questions. [4X2=8]

a) What are the things the girl does not want to share?

b) Why did the men rush back to the ship?

c) What are the things the Sultan give to the Barber?

d) What activity was going on in the class?

4. Fill in the blanks by choosing the suitable one. [2]

a) Do you like football _____ cricket? (or/ and)

b) We went to the zoo _____ we saw many animals. (where/ which)

5. Write True or False. [2]

a) The Sultan gave three gold coins to the barber. _____

b) Jane was a talkative girl. _____

6. Write the meaning of the following words. [2]

a) exhausted - _____

b) astonishment - _____

7. Write a notice on our school Annual function celebration, use the following clues. [4]

[date, venue(place), time , events or programme, chief guest, prize distribution]

8. Write the degree/comparison of adjective. [2]

a) difficult _____

b) strong _____

9. Punctuate the following sentences. [2]

a) oh no the bus has gone

b) next wednesday my sister neeta is going to join the state bank of india

10. Give one word for this sentence. [1]

a) When a person tells the story of his life in his own words
_____.

11. The full form of shan't is _____ . [1]

12. Fill in the blanks with appropriate article. [1]

a) The boy and girls went to ____ seaside for a picnic.

b) Raghav is ___ popular boy.

13. Write the rhyming of these words. [1]

a) carriage - _____ b) creatures - _____

14. Rearrange the following letters to form meaningful words. [2]

a) peasluer - _____

b) dertsse - _____

15. Write the opposite of the following words. [2]

a) quiet - _____ b) important - _____


16. Make a naming word by adding -less. [1]

a) use - _____ b) care - _____

परमाणु ऊर्जा केंद्रीय विद्यालय क्र. - 4, रावतभाटा

द्वितीय सामयिक परीक्षा (2019-20)

विषय : हिन्दी



कक्षा – पाँचवीं

अनुभाग : _____

दिनांक : 07/01/2020

विद्यार्थी का नाम : _____

अनुक्रमांक : _____

निरीक्षक के हस्ताक्षर : _____

समय : 90 मिनट

परीक्षक के हस्ताक्षर : _____

पूर्णांक : 40 प्राप्तांक : _____

प्रश्न 1. लिखे गए देशों की मुद्राएँ लिखो |

1

फ्रांस -----

इंग्लैंड -----

जापान -----

भारत -----

प्रश्न 2. अंधेर नगरी की प्रजा राजा के मरने पर खुश क्यों हुई ?

1

उत्तर - -----

प्रश्न 3. आजकल इन शब्दों को कैसे लिखते हैं ?

1

छन -----

महूरत -----

प्रश्न 4. सही शब्द छाँटकर वाक्य पूरे करो |

1

फटाफट

खटाखट

झकाझक

चकाचक

1- आज रहमान ने ----- सफ़ेद कुर्ता पजामा पहना है |

2- हंसा अपना सारा काम ----- कर लेती है |

प्रश्न 5. सिक्के कौन - कौन सी धातु के बने होते हैं ?

1

उत्तर - -----

प्रश्न 6. लिंग पहचान कर लिखो |

1

वर्दी -----

दफ़्तर -----

प्रश्न 7. रेखांकित शब्द का प्रयोग करते हुए एक वाक्य बनाओ | 1

खूखार

डाकू

समर्थन

उत्तर - -----

प्रश्न 8. लिंग बदलो | 1

दादा - -----

बाघ - -----

प्रश्न 9. संवाद किसे कहते हैं ? 1

उत्तर - -----

प्रश्न 10. जब तुम मुख्य अध्यापिका के कमरे में जाते हो तब तुम कैसा महसूस करते हो ? 1

उत्तर - -----

प्रश्न 11. तुकांतक शब्द लिखो | 1

चमकती - -----

चढ़ूँगा - -----

प्रश्न 12. कोष्ठक में लिखे शब्दों के सही वचन बदलकर वाक्य पूरे करो | 1

1 - दादी ने नमाज पढ़ने के बाद ----- खाई | [दवाई]

2 - खाने के साथ मीठी ----- ज़रूर पकाया करो | [चीज]

प्रश्न 13. किन्ही दो चीजों के नाम लिखो जो तुम्हें 'तरमाल' नहीं लगती | 1

उत्तर - -----

प्रश्न 14. क्या होता यदि मंत्री की गर्दन फंदे के बराबर की होती | 1

उत्तर - -----

प्रश्न 15. विलोम शब्द लिखो ।

1

खुश किस्मती - -----

हल्की - -----

प्रश्न 16. वर्ग पहेली से खाद्य सामग्री ढूँढ कर लिखो ।

2

भा	जी	र
खी	रा	व
क	क	ड़ी

प्रश्न 17. सही कारक चिन्ह द्वारा वाक्य पूरे करो ।

2

मोहन ----- माताजी ----- आज साग बनाया । मोहन ----- वह बहुत पसंद

आया, उसने दुबारा माताजी ----- साग बनाने के लिए कहा ।

प्रश्न 18. साबुत दाल और धुली दाल में अंतर स्पष्ट करो ।

2

साबुत दाल -----

धुली दाल -----

प्रश्न 19. किसी व्यक्ति का रौब किन बातों से पता चलता है ?

2

उत्तर - -----

प्रश्न 20. पाठ के अनुसार सही कवि व लेखक के साथ मिलान करो ।

2

बाघ आया उस रात

सोहन लाल दिवेदी

एक दिन की बादशाहत

आर के नारायण

स्वामी की दादी

जीलानी बानो

गुरु और चेला

नागार्जुन

प्रश्न 21. “ वो इधर से निकला , उधर चला गया ” यह बात कौन किसे बता रहा होगा ?

2

उत्तर - -----

प्रश्न 22. मैडल से चूड़ियाँ बनवा लेने पर दादी ने बुआ को महामूर्ख क्यों माना ? 2

उत्तर - -----

प्रश्न 23. मुहावरे का अर्थ लिखकर वाक्य में प्रयोग करो । 2

आँख दिखाना = -----

वाक्य - -----

प्रश्न 24 . शब्दों का अर्थ लिखो । 2

निवाला - ----- सब मजिस्ट्रेट - -----

पटसन - ----- वर्गाकार - -----

प्रश्न 25. सब मजिस्ट्रेट कौन होता है ? क्या वह पुलिस विभाग में होता है ? 2

उत्तर - -----

प्रश्न 25. अँधेरी नगरी के राजा अथवा स्वामी की दादी के बारे में पाँच-पाँच वाक्य लिखो । 5

उत्तर - -----



ATOMIC ENERGY CENTRAL SCHOOL No.-4, RAWATBHATA

Periodic Test – 2 (2019-20)

Subject : Mathematics

Class – V Section : _____

Date: 08/01/2020

Name of the student : _____

Roll No: _____

Invigilator's sign: _____

Time - $1\frac{1}{2}$ Hours

Examiner's sign: _____

MM : 40 MO : _____

I. Choose the correct answer from the brackets and fill in the blanks. (6 M)

- 1) Assam is located to the _____ of Gujarat. (West , East, North)
- 2) A open box has _____ faces. (4 5 6)
- 3) One – fifth of a metre = _____ (2 cm, 20 mm, 20 cm)
- 4) Rupee 0.6 = _____ (6 paise , 60 paise , 6 rupee)
- 5) If the side of a square is doubled, then the area of big square is _____ times the area of small square. (4 , 3 , 2)
- 6) 3.5 °C less than 10 °C is _____.
- 7) 8.6 centimetre = _____ millimetre.
- 8) The fencing of a square shaped garden is 152 m. The side of the garden is _____ m.
- 9) The width of a greeting card is 8 cm and its area is 112 square cm. The length of the card is _____ cm
- 10) By how much is 23°C greater than 16.4°C? _____
- 11) Two states which have the sea on one side are _____, _____
- 12) One tenth of a centimeter is called one _____.

II. Match the following. (2 M)

- | | |
|---|------------|
| a) The side of a square of area 121 sq cm | i) 12 cm |
| b) 1 m 87 cm less than 2metres | ii) 10 m |
| c) 2 times 6 cm | iii) 11 cm |
| d) $\frac{1}{100}$ of 1 km | iv) 13 cm |

III. Do as directed.

(16 x 2 = 32)

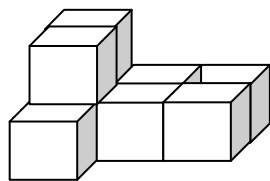
1) If 2 cm on a map = 1 km on ground, how many cm on the map will be equal to 9 km on the ground?

Ans.

2) Draw a shape that can be folded into a square based pyramid.

Ans.

3) How many cubes are needed to make this model?



A: _____

4) If a pencil costs Rs 8.50, find the cost of two and half dozen pencils.

Ans.

5) Ram has to grow 58 cm to reach 2 metres height. What is Ram's height in metres?

Ans.

6) The length of a rectangle is 20 cm and its perimeter is 70 cm. What is its width?

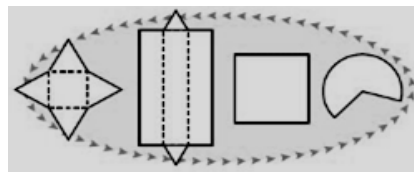

Ans.

7) Draw two rectangles of area 20 sq cm. (write their length and width)

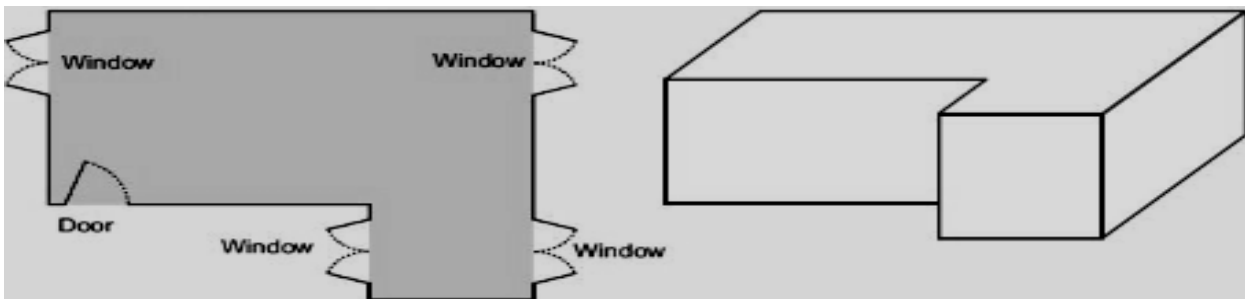
8) Area of a rectangle is 108 sq cm and length is 12 cm. What is the width of rectangle?

Ans.

9) Match each shape below with a box into which it fold.



10) Look at this floor map of a house. Make doors and windows on the deep drawing of this house.



11) There is a field of 325 sq m. If in 1 sq m of area 3 children sit.

(a) Total number of children occupied the area of field are _____.

(b) If in given field, there are 1300 children, then in one sq metre there are _____ children.

12) Ram wants to tile his drawing room floor with tiles. His drawing room is 540 cm in length and 360 cm width. If the length of tile is 20 cm and width is 10 cm then how many tiles will he need to tile the floor?

Ans.

13) The temperature in each city was noted at 2pm on 15 December 2019.

City	Shimala	Jaipur	Indore	Mumbai	Chennai	Kota
Temperature at 2 pm	9.1°C	24.5°C	27.6°C	35.2°C	33.4°C	21.6°C

(a) Which place had the highest temperature at 2 pm? Which place has the coolest at that time?

Ans. Highest-_____ Coolest-_____

(b) How much higher is the temperature in Chennai from that in Shimala?

Ans.

(c) How many degree will the temperature need to rise for it to reach 30°C in Indore?

Ans.

14) If one Yuan is equal to Rs. 7.90.

(a) Change 450 Yuan in Indian rupees?

Ans.

(b) How many Yuan can you change for Rs. 395?

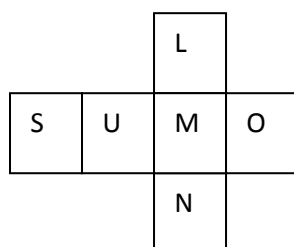
Ans.


15) The scale of a map is 1cm= 200 km.

a) $3\frac{1}{4}$ cm on map = _____ on the ground.

b) _____ cm on the map = 300 km on ground.

16) The net of a cube is given. If this net is folded to make a cube in such a way that the letter O is at the bottom, then which letter will be on the top?





ATOMIC ENERGY CENTRAL SCHOOL No.-4, RAWATBHATA

Periodic Test – 2 (2019-20)

Subject: EVS

Class – V

Section: _____

Date: 06/01/2020

Name of the student: _____

Roll No: _____

Invigilator's sign: _____

Time - 1½ Hours

Examiner's sign: _____

MM: 40 MO: _____

1) Fill in the blanks: (1x 5=5)

- a) _____ is a high, dry and cold desert located in India.
- b) India's constitution was prepared under the leadership of _____.
- c) Tourists who come to Srinagar love to stay in _____.
- d) The walls of 'Lekha' are made with _____.
- e) Afsana played for the _____ team.

2) Give two examples for the following (1x5=5)

- a) Petroleum products _____
- b) Indian sportsperson _____
- c) Types of boat in Srinagar _____
- d) Forces that rescue people in disaster _____
- e) Fossil fuels _____

3) Write short note on: (2x1=2)

The Changpa Tribe

4) Look at the data given below and give answers that follow : ($\frac{1}{2} \times 4 = 2$)

Oil	rate of 1 Liter <i>in 2011</i>	rate of 1 Liter <i>in 2019</i>
Petrol	Rs 58	Rs 81
Diesel	Rs 41	Rs 72

- a) In Eight years, the rate of petrol went up by _____ Rupees and of diesel by _____ Rupees
- b) The difference in rates of petrol and diesel in the year 2011 was _____ Rupees and in the year 2019, it is _____.

5) Give reasons. (2x5=10)

a) We see different types of houses in different places.

b) Changpas mark their animals.

c) Changpas keep shifting from one place to another.

d) Some people left Gandhiji's Sabarmati Ashram:

e) We should sit under a table holding it tightly during an earth quake.

6) Name the following: ($\frac{1}{2} \times 4 = 2$)

a) The strong and warm tents made by Changpas: _____

b) A disaster caused by nature: _____

c) A neighboring State of Mizoram: _____

d) The rocky plains where Changpas live: _____

7) Give short answer:

(1x5=5)

a) The prices of petrol and diesel are going up :

b) What are the uses of diesel?

c) What protects the goats from extreme cold?

d) What was very special about Nagpada basketball team?

e) How did Jatrya suffer in Sinduri village ?

8) Match the following: (*use scale*)

(1/2x8=4)

- | | | | |
|-----------------------|---|---|-------------------------------------|
| a) Mumbai | * | * | i) place to keep animals |
| b) Manali | * | * | ii) noisy city |
| c) Srinagar | * | * | iii) natural calamity |
| d) Refinery | * | * | iv) hilly area |
| e) Petroleum products | * | * | v) Dal Lake |
| f) Lekha | * | * | vi) listen to sound of heartbeat |
| g) Earthquake | * | * | vii) should be used wisely |
| h) Stethoscope | * | * | viii) petrol and diesel are cleaned |

2) Write "True" or "False"

(1/2x6=3)

- a) Vehicles which run on CNG produce less smoke. _____
- b) We get petrol and diesel from petroleum. _____
- c) Girls and boys should be treated equally. _____
- d) Girls of NBA team were not cooperating with each other. _____
- e) The village sarpanch helped people during the earth quake. _____
- f) We should not touch the people who do cleaning work. _____

9) On the map of India show the following states:

(1/2 x4=2)

- a) Himachal Pradesh
- b) Maharashtra
- c) Gujarat
- d) Jammu and Kashmir

