

ATOMIC ENERGY EDUCATION SOCIETY

TERM - II EXAMINATION, MARCH -2018

Subject: English

Class: III

Maximum Marks-80

Time: 3 Hours

Name: _____ Section _____ Roll Number: _____

Invigilator's signature: _____ Examiner's Signature: _____

Checker's Signature: _____ Marks obtained: _____

SECTION A (KNOWLEDGE) – 35 Marks

A1. Choose the correct word and fill in the blanks.

(1X5=5)

1. We _____ our heads to say a "No".
i) nod ii) shake iii) rotate
2. A rabbit lives in a _____.
i) shell ii) web iii) burrow
3. Two weeks is a _____.
i) fortnight ii) month iii) century
4. The postman brings _____ for us.
i) milk ii) newspaper iii) letters
5. Train is a means of _____ transport.
i) air ii) land iii) water

A2. Match the following.

(1 X 5=5)

- | | |
|-----------------|-----------------------|
| 1. A cobbler | writes plays |
| 2. An astronaut | looks after patients |
| 3. A dramatist | mends our shoes |
| 4. A clown | travels in spacecraft |
| 5. A nurse | makes people laugh |

A3. Answer in one word or two words.

(1X3 =3)

1. What did the tiger cub catch one day?

2. Where do trains run?

3. Who annoyed the road?

A4. Rearrange the words to make meaningful words.

(1X3=3)

1. a h d r i s

2. p e s h e

3. t e s f r o

A5. State whether the following statements are “true” or “false”.

(1X3=3)

1. The seals dive into hot water.

2. The beginning of the day is dawn.

3. The mother tiger hunted in day light.

A6. Answer the following questions in one sentence each.

(2X2=4)

1. What does the baby do with the pebbles?

2. What is the secret the speaker is hiding in the poem “Don’t tell”?

A7. Who said to whom?

(2X2=4)

1. "My child, why are you carrying a baby on your back?"

_____ said to _____.

2. "I can't walk on burning sand."

_____ said to _____.

A 8.Rearrange the words to make meaningful sentences.

(1X2=2)

1. calling /softly / are / birds / the

2. wants / your / catch / moon / the / baby / to

A9.Answer the following in two or three sentences.

(3X2=6)

1. Write any three special things about camel.

2. What does the child in the poem "What's in the mailbox?" decide to do?

SECTION B (UNDERSTANDING) -25 Marks

B1. Read the passage given below and answer the following questions.

Once upon a time, there lived a poor boy. He was very good at drawing. He drew pictures with sticks and stones because he was too poor to buy a pencil. One day an old man appeared before him and gave him a pencil. He asked the boy to draw pictures only for poor people. Then he disappeared. The boy began to draw. He drew a cock. It changed into a real cock.

He understood that it was a magic pencil. He helped the poor people of the village by drawing the pictures of what they want.

Soon the king heard about the boy. He asked him to draw him a tree of gold coins. The boy knew that the king was greedy. He did not do so. The king got angry and put him in prison. But the clever boy drew a picture of a key. It changed into a real key. He opened the door with it and ran away.

B1.1 Tick the correct answer.

(1X2=2)

1. The boy drew pictures with

_____.

- | | |
|----------------------|-------------------------|
| a) sticks and stones | b) roots and flowers |
| c) brush and paint | c) sketches and rollers |

2. A word that describes the king in the passage is

_____.

- | | | | |
|---------|-----------|-----------|-----------|
| a) Poor | b) clever | c) greedy | d) strong |
|---------|-----------|-----------|-----------|

B1.2 Choose the correct word and fill in the blanks.

(1X2=2)

1. The old man gave the boy a _____.

- | | | |
|--------------------|------------------|----------------------|
| i) charcoal pencil | ii) magic pencil | iii) watercolour set |
|--------------------|------------------|----------------------|

2. The past tense of 'draw' is _____.

- | | | |
|---------|----------|------------|
| i) drew | ii) drew | iii) draws |
|---------|----------|------------|

B2. Read the poem carefully.

Little Boy Blue, come blow me your horn;
The sheep are in the meadow,
The cow is in the corn.
Where's boy that minds the sheep?
Under a haystack fast asleep.
Will you wake him? No, not I
If I do, he'll sure to cry.
Little Boy Blue, come blow me your horn;
The sheep are in the meadow,
The cow is in the corn.

B2. 1. Tick the correct answer.

(1 x 4 = 4)

1. The poet is asking the blue boy to blow his _____
a) horn b) flute c) trumpet

2. The meaning of meadow is _____
a) hill b) green grass c) lake

3. The boy is sleeping under the _____
a) rug b) cot c) haystack

4. The boy _____ the sheep and cows.
a) beats b) minds c) chases

B3.1 Number the sentences in the correct order.

(1/2X2=2)

- Then the horse went down the hills to get some hay. _____
- The child went with the puppy to have fun. _____
- After that a puppy went up in the hills to roll and play. _____
- A man went down the hills to buy some bread. _____

B3.2 Name the following.

(1X2=2)

1. A hot dry sandy land with less water. _____
2. A railway truck for carrying goods. _____

B3.3 Read the poem given below and answer the following questions.

The monkey swings by its tail,
And birds may hop upon the ground
Or spread their wings and sail
But boys and girls
Have much fun:
They leap and dance
And walk and run.

A. Choose the correct answer and fill in the blanks.

(1x4=4)

- a) The monkey swings from branches by its _____.
i) arms ii) legs iii) tail
- b) The _____ hop about the ground.
i) worms ii) birds iii) monkeys
- c) Boys and girls have much more _____.
i) fun ii) fight iii) quarrel
- d) The rhyming word for 'tail' is _____.
i) soil ii) sail iii) toil

B3.4 (b) Look at the picture and write four sentences about Penguin. Use the clues given. (Icy-cold region, flightless bird, swimmer, catches fish) (4)



SECTION C (APPLICATION)-20 Marks

C1. Choose the opposite of the underlined word and fill in the blanks(1x2=2)

a) Arjun is strong but his brother is _____.

(weak small young)

b) My mother has long hair but mine is _____.

(short little tiny)

C2. Choose the correct word and fill in the blanks. (1/2X4=2)

a) These _____ shirts are _____ tight for me. (too/
two)

b) _____ always keep an _____ on my puppy. It is naughty. (l/eye)

C3. Circle the odd one out.

(1X2=2)

1. Hop walk run swim

2. Cow sheep bear goat

C4. Match the animals with their sounds.

(1/2X4=2)

Elephant	roars
Tiger	bleats
Sheep	neighs
Horse	trumpets

C5. Punctuate the following.

(1/2X2=1)

do you store food in your stomach

C6. Write the full form of.

(1X1=1)

Isn't _____

C7. Add - ful and fill in the blank .

(1X1=1)

The books are _____. (use)

C8. Add ly and fill in the blank.

(1X1=1)

Meena climbed the hill _____. (slow)

C9. Make two words using the letters from the word given below. (1/2X2=1)

HELICOPTER

1. _____

2. _____

C10. Make sentences using the words given in bracket.

(1X4=4)

1. (silly) :

2.(pounced) :

3. (always) :

4. (enough):

C11. Pick out any two rhyming words and pair them in the spaces below.

(hill hay fine hare mill fare mine day) **(1X2=2)**

1. _____

2. _____

C12. Complete the following.

(1)

When I'm bored _____

Total No. of Pages : 8

ATOMIC ENERGY EDUCATION SOCIETY

TERM-II EXAMINATION, March -2018

Subject –EVS

Maximum Marks – 80

Class – III

Time Allowed – 3 Hours

To be filled by student

Name of the student _____

Name of the School - _____

Roll number _____ Class _____ Sec. _____

Signature of the Invigilator _____



Signature of the Examiner _____

Signature of the Checker _____ Marks Obtained

Knowledge (35 marks)

1 Fill in the blanks with the correct words given in the brackets.

(1x10 =10)

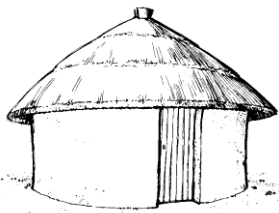
1. Braille script is based on _____ points. (four / six)
2. Letters are _____ before sending them to their proper address.(mixed / sorted)
3. Potters make pots with _____.(clay / stone)
4. Chess is an _____ game. (outdoor / indoor)
5. We get stamps in _____.(bank / post office)

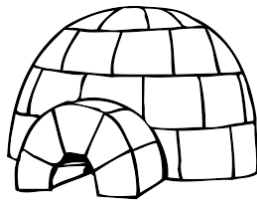
6. _____ is capital of India. (New Delhi / Mumbai)
7. All the things in nature are _____ .
(interdependent / not interdependent)
8. Rainfall is very _____ in Rajasthan .(scarce / heavy)
9. Clothes are made by _____ threads. (sticking / weaving)
10. People who cannot see carry a _____ stick when they go out.
(Black / white)

2. Name the following . (1x5=5)


1. A stem which is cooked as a vegetable. _____
2. Tool used for digging soil. _____
3. A special drink of Kashmir. _____
4. A game played with small coloured glass balls. _____
5. These are pitched in the ground for staying in a camp. _____

3. Identify the pictures and write their names (1x5=5)











4. Answer the questions in one or two sentences. (1x5=5)

1. What are the things that a potter requires to make pots?


2. What types of houses are seen in big cities?

3. Write one way of re-using water.

4. How are the roofs of houses in hilly area?

5. Write one way how you would take care of your pet.

5. Draw a Letter Box and colour it. (5)

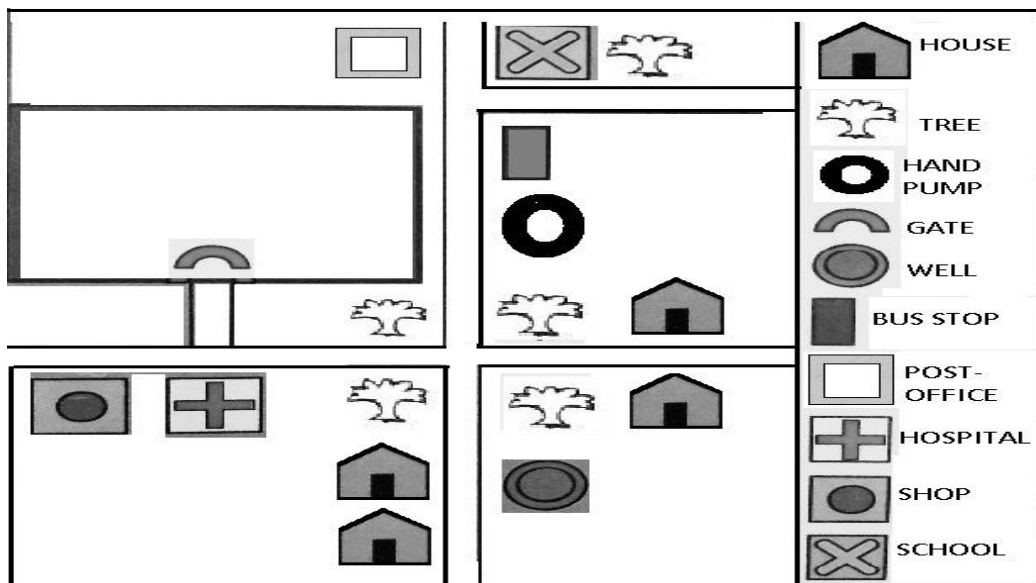


6. Write a short note on Delhi.

(2 1/2)

7. Look at the map given below and complete the following.

(2 1/2)



- a) There are _____ trees in the map.
- b) There are four _____ in the map.
- c) The shop is near the _____. (Hospital/ Post office)
- d) The bus stop is nearer to the _____. (Handpump/Gate)
- e) Without the list of symbols could you have read the map?
_____. (Yes/No)

Understanding-25 marks

8. Write whether the statements are True or False. (1 x5=5)

1. Unstitched clothes can be used to drape in different ways. _____
2. We should keep the water running while brushing our teeth. _____
3. People in Assam build wooden houses. _____
4. In a family, children and the old are not taken care of. _____
5. All the families are the same everywhere _____

9. Match the following. (1x4=4)

Medicine for cough and cold

Tennis

Worms eat these

Basil(Tulsi)

Repair cars and scooters

Fruits

Sania Mirza

Mechanic

10. Give two examples of each (1x6=6)

a) Utensils made of clay

b) Types of letter

c) Games you like to play

11. Complete the following (1x5=5)

a) Wood comes from _____

b) Trees need _____ , _____

c) Bricks are made from _____ , _____

12. Write your full address in the space given below. (2½)

ADDRESS:

PIN: _____

13. Complete the sentences. (2½)

1. Water collected in tanka is mostly used for drinking because

2. Symbols are used in maps because

3. Braille script was invented by

Application (20 marks)

14. Circle the odd one

(1x5 =5)

- | | | | | |
|----|------------------|--------------|-----------|---------------|
| 1. | snake and ladder | chess | cricket | playing cards |
| 2. | honey | egg | banana | milk |
| 3. | mango | curry leaves | jackfruit | Amla |
| 4. | stamps | postcard | phone | parcel |
| 5. | dupatta | shirt | turban | lungi |

15. Match the following

(1 x 5=5)

Srinagar

grass

Assam

rat

Goat

snow

Manali

shikara

Snake

heavy rainfall

16. Complete the table

(1 x 5=5)

Name of the animal

Why we keep it

Ox

Dog

It gives milk

Honeybee

We love it

17. Find the names of five food items that we get from plants in the grid and encircle them. (1x5=5)

S	P	I	N	A	C	H
W	D	Q	H	Z	U	Y
T	O	M	A	T	O	C
G	K	P	L	X	N	O
R	S	T	U	V	I	R
L	E	M	O	N	O	N
C	S	I	Q	M	N	V

परमाणु ऊर्जा शिक्षण संस्था

अणुशक्तिनगर, मुंबई - 400094

वार्षिक परीक्षा(सत्र-2) (2017-2018)

(पृष्ठों की संख्या-12)

कक्षा: तीसरी(3)

विषय: हिंदी

समय: 3 घंटा

पूर्णांक: 80

नाम..... अनुक्रमांक..... वर्ग..... दिनांक.....

विद्यालय का नाम

निरीक्षक के हस्ताक्षर :.....परीक्षक के हस्ताक्षर.....

जांचकर्ता के हस्ताक्षर

प्राप्तांक

प्र. 1 पठित गद्यांश को पढ़कर नीचे लिखे प्रश्नों के उत्तर दो ।

अच्छे पेड़ों की क्या कमी है ! नारियल के पेड़ की ही सोचो। नारियल की जटाओं को काट कर मैं मोटी डोरियाँ बना सकता हूँ और डोरियों से मैं मज़बूत चटाइयाँ बना सकता हूँ । रस्सियों और चटाइयों को मैं शहर के बाज़ार में बेच सकता हूँ । मैं नारियल का पानी पी सकता हूँ । मैं नारियल की गरी खा सकता हूँ और कुछ गरी सुखा कर मैं खोपरा भी तैयार कर सकता हूँ, खोपरे को पेरकर मैं गोले का तेल निकाल सकता हूँ । नारियल के छिलके को साफ़ करके कटोरे और प्याले बना सकता हूँ । ठीक तो है, मेरे लिए तो यही पेड़ सबसे अच्छा है । मैं तो इसी के नीचे घर बनवाऊँगा।

क. मोटी डोरियाँ किसको काट कर बना सकते हैं ? (1)

ख. डोरियों से क्या बनाते हैं ?

(1)

ग. गोले का तेल कैसे निकालते हैं ? (1)

घ. नारियल के छिलके को साफ़ करके क्या - क्या बनाते हैं ? (1)

ङ. गोले का तेल किस काम आता है ? (1)

च. वाक्य पूरे करो । (3)

1. रस्सियों और चटाइयों को मैं-----के बाज़ार में बेच सकता हूँ
2. मैं नारियल का ----- पी सकता हूँ ।
3. मैं नारियल की ----- खा सकता हूँ

छ. वचन बदलो । (2)

कटोरा----- छिलका-----

प्याला----- गोला -----

प्रश्न 2 अपठित गद्यांश को पढ़कर नीचे लिखे प्रश्नों के उत्तर दो ।

एक दिन की बात है । चंदन वन में बहुत गर्मी पड़ी। सरोवर सूखने लगा । सरोवर में एक कछुआ रहता था । वह भी परेशान हो गया । सरोवर के पास दो हंस भी रहते थे । हंसों ने सोचा कहीं दूसरी जगह चलते हैं, जहाँ

हमें पानी मिल सके ।

एक हंस ने कहा, “हम नंदन वन की तरफ़ चलते हैं ।” दूसरे हंस ने कहा, हाँ। “लेकिन इस कछुए का क्या होगा ?”

“यह बेचारा तो मर जाएगा ।”

“इसे भी साथ ले चलते हैं ।”

“मगर कैसे ?”

दोनों हंसों ने एक डंडी ली, किनारों से उसे पकड़ा और कछुए ने बीच में मुँह से पकड़ लिया । लोगों को हँसता देखकर कछुआ भी हँसने लगा । उसका मुँह खुला । डंडी छूट गई और वह गिर पड़ा ।

नीचे दिए गए प्रश्नों के सही उत्तरों पर सही (✓) का निशान लगाइए ।

क. सरोवर कैसे सूख गया ? (1)

गर्मी से पानी पीने से सिंचाई से

ख. सरोवर में कौन रहता था ? (1)

मछली मेंढक कछुआ

ग. हंस कहाँ जाना चाहते थे ? (1)

नंदन वन में चंदन वन में मंगल वन में

घ. हंस क्यों जाना चाहते थे? (1)

सैर करने के लिए

कछुए ने कहा

वहां पानी सूखने लगा था ।

ड. हंस किसको साथ ले गए ? (1)

मछली को केकड़े को कछुए को

च. कछुआ क्यों गिर पड़ा ? (1)

तेज़ हवा से डंडी टूटने के कारण हँसने के कारण

छ. हंस कछुए को नंदन वन कैसे ले गए ? (1)

ज. कहानी में किन दो जानवरों की बात की गई है ? (1)

झ. कहानी में किस मौसम की बात की गई है ? (1)

ञ. कहानी का कोई नाम लिखिए। (1)

प्रश्न 3 नीचे लिखे प्रश्नों के उत्तर एक शब्द या एक वाक्य में लिखिए ।

क. नीचे लिखी चीजें क्या हैं उनके नाम लिखो (1)

1. कावेरी, सतलुज, गंगा, यमुना -----

2. जलेबी, पेड़ा, कलाकंद, लड्डू -----

ख. इन चीजों के लिए कहाँ जाएँगे? (2)

1 बाल कटवाने -----

2 सुराही खरीदने -----

ग. दिए गए शब्दों को पढ़ो और मुहावरों को पूरा करो । (1)

(आस्तीन, ग्यारह, दीया, आरसी)

1. एक और एक ----- होना

2. ----- तले अँधेरा

घ. कीड़ों (जंतुओं) के नाम लिखो जो डंक मारते हैं । (1)

ङ. चवन्नी का मतलब चार आना , अब नीचे दिए गए शब्दों का मतलब लिखो । (1)

अठन्नी ----- इकन्नी -----

च. तुम्हारे मुँह में किन चीजों को देखकर पानी आता है ? (1)

छ. इन मौकों पर किस पेड़ के पत्ते का इस्तेमाल करोगे, उनके नाम लिखो।(2)

1. सीटी बजाने के लिए -----

2. मेहमान को खाना खिलाने के लिए -----

ज. फलों के नाम लिखिए । (2)

गुठली वाले

बिना गुठली वाले

झ. वचन बदलो । (2)

सीढ़ी -----

सड़क -----

रोटी -----

पिंजड़ा-----

ञ. शब्दों को शुद्ध करो । (1)

पहाड़ि -----

असमानी-----

ट. घर से संबंधित शब्दों पर गोला लगाओ । (2)

घर आँगन बरामदा सड़क डाकघर

रसोई नहर दालान अस्तबल रहट

ठ. उदाहरण के अनुसार जोड़े के शब्द बनाओ । (1)

दिन - दीन

ड. जानवरों को उनकी बोली के साथ मिलाओ । (2)

कुत्ता	दहाड़ना
शेर	भौंकना
बकरी	चिंघाड़ना
हाथी	मिमियाना

ढ. उदाहरण के अनुसार शब्द बनाओ । (1)

उदाहरण - रंग- रंगाई

चढ़ -----

बुन -----

ण. शब्दों को उनके अर्थों से मिलाओ । (2)

ऊँची	प्रशंसा
कतई	जरूर
अवश्य	बुलंद
तारीफ	बिल्कुल

प्रश्न 4 नीचे लिखे प्रश्नों के उत्तर एक वाक्य में लिखिए ।

क. वाक्य बनाओ । (2)

1. धीरे -धीरे -----

2. पीछे -पीछे- -----

ख. कविता की वे पंक्तियाँ लिखो जिनसे पता चलता है कि - (2)

1. काबुली वाला कंजूस था ।

2. मिर्च बहुत तीखी थी ।

ग. इनके नाम ये क्यों हैं लिखो? (2)

1. छलनी- -----

2. दातुन- -----

घ. वाक्यों को ठीक करके लिखो । (2)

1. पुतुल काम करने मना कर दिया ॥

2. लता सब मूँगफली खिलाई ।

प्रश्न 5 पाठों और कविताओं पर आधारित प्रश्नों के उत्तर लिखिए ।

1. सेठ कपड़ा लेने किस दिन आया होगा ? (2)

2. शिवदास ने गुरुजी की थैली देख कर अपनी गाड़ी क्यों दे दी ? (2)

3. बाघ की खबर पूरे गाँव में कैसे फैल गई ? (2)

4. नाना मुझे झाड़- फूँक वाले आदमी के पास क्यों ले गए ? (2)

5. किन फलों को छिलके के साथ नहीं खा सकते ? (2)

प्रश्न 6 कल्पना व सामान्य ज्ञान पर आधारित प्रश्नों के उत्तर लिखिए ।
(5)

क. तुम्हें अगर पेड़ लगाना हो तो तुम कौन सा पेड़ लगाओगी? तुम वही पेड़ क्यों लगाना चाहोगी?(पाँच वाक्य लिखो)

ख. रोटी कैसे बनाएंगे ? नीचे दिए गए वाक्यों को सही क्रम में लिखो । (5)

आग पर फुलाएँगे, चकले पर बेलेंगे, आटे को सानेंगे,
तवे पर पकाएँगे, गेहूँ को पिसवाएँगे

1. -----
2. -----
3. -----
4. -----
5. -----

ग. नीचे लिखे अनुच्छेद का सुलेख कीजिए ।

(5)

एक दिन बत्तख अपने बच्चों के साथ घूमने जा रही थी । आगे-आगे बत्तख पीछे-पीछे बच्चे । बच्चे ऊपर देख रहे थे । पेड़ पर शहद का छत्ता लगा हुआ था । वे ऊपर देख कर चलते जा रहे थे । आगे एक पाइप आया । उन्होंने पाइप देखा नहीं । वे उसके अंदर घुस गए । जब वे बाहर आए तो एकदम काले हो गए । बत्तख उन्हें पहचान नहीं पाई । वह रोने लगी । आगे एक तालाब आया । बच्चे तालाब में गए और उनका रंग धुल गया । उनको देख कर बत्तख खुशी से चिल्ला पड़ी ।

घ. दिए गए चित्र के बारे में एक अनुच्छेद लिखिए ।

(5)



ATOMIC ENERGY EDUCATION SOCIETY
Anushaktinagar, Mumbai - 400094
Term-II Examination, March-2018

Class : 3
Time : 3 hours

Sub : Mathematics
Maximum Marks : 80

Name : _____ Roll No. _____ Sec : _____

School & Centre : _____ Date : _____

Invigilator's Sign: _____ Examiner's Sign: _____

Checker's Sign: _____ Marks Obtained : _____

I. Choose the correct answer and fill in the blanks. (1 x 13 = 13)

i) $24 \div 3 = \underline{\hspace{2cm}}$ (12, 8, 3)

ii) It takes _____ for an egg to hatch. (hours , months , days)

iii) Water is measured in _____. (kilometres , litres , kilograms)

iv) _____ x 7 = 56 (56, 8, 7)

v) _____ \div 4 = 0 (8 , 0, 16)

vi) A spoon will hold _____ than 1 litre of soup. (more , less , equal)

vii) My mother's weight is _____ than 3 kg. (less , more , equal)

viii) $40 \div \underline{\hspace{2cm}} = 8$ (5, 48, 3)

- ix) $14 \times 5 = \underline{\hspace{2cm}}$ (60, 70, 42)
- x) 9×6 means 9 times $\underline{\hspace{2cm}}$. (18, 9, 6)
- xi) $\text{Rs. } 6.50 + \text{Rs. } 2 = \underline{\hspace{2cm}}$. (Rs. 12.50, Rs. 8.50, Rs. 6.70)
- xii) The time shown by the clock is $\underline{\hspace{2cm}}$.



(6 o'clock, 12 o'clock, 5 o'clock)

- xiii) Numbers that end with 0, 2, 4, 6 and 8 are called $\underline{\hspace{2cm}}$ numbers.
(odd, even, prime)

II. Tick the correct answer. (1 x 15 = 15)

- How many months does a year have ?
a) 7 b) 12 c) 30
- Daddy shared 6 ten rupee coins equally among Amit and 2 of his cousins.
How much money did each one get ?



- a) Rs. 120 b) Rs. 20 c) Rs. 30
- Which year will it be 4 years from now ?
a) 2020 b) 2022 c) 2019
 - ANNA MONEY MOM DAD
One of the words in this group is different from the others. Which one is it ?
a) MONEY b) MOM c) ANNA

5. How many days make a week ?

- a) 12 b) 7 c) 30

6. 4 8 12 _____

Which of the following will complete the pattern ?

- a) 4 b) 16 c) 24

7. Meera and Meeta used a glass to fill their bottles.

Meera had to use the glass 3 times to fill her bottle.



Meeta had to use it 9 times to fill her bottle.



So Meeta's bottle can hold _____ as much water as Meera's bottle.

- a) half b) thrice c) twice

8. How many days are there in the month of July ?

- a) 28 b) 30 c) 31

9. A frog jumps 2 steps at a time and a kangaroo jumps 20 steps at a time. If they both start jumping from step 0, at which step will they both meet ?

- a) step 10 b) step 22 c) step 20

10. 13 24 75 39
Which of the following numbers is different from the others in the group ?
a) 75 b) 24 c) 13
11. A watermelon balances 4 mangoes of the same weight. A mango weighs half kg. What is the weight of the watermelon ?
a) 4 kg b) 2 kg c) 5 kg
12. ZY WX VU TS - Which is the odd one in the group ?
a) ZY b) TS c) WX
13. How many 50 paise coins make a rupee ?
a) 3 b) 2 c) 4
14. There were some sweets in a box. They were distributed among 5 children and each child got 6 sweets. How many sweets were there in the box ?
a) 30 b) 11 c) 1
15. Which is the shortest month of the year ?
a) July b) May c) February

III. Do as directed. (2 x 12 = 24)

1. Encircle the odd numbers.

34 67 89 32 55 98 3

2. Complete the following multiplication table.

one time 3 is $1 \times 3 = 3$ _____ times 3 is _____

two times 3 is $2 \times 3 = 6$ _____ times 3 is _____

3. Arrange the following names according to their alphabetical order.
(A comes first then those with B, C, D, and so on)

Madhuri, Yash, John, Chandan

1) _____ 2) _____ 3) _____ 4) _____

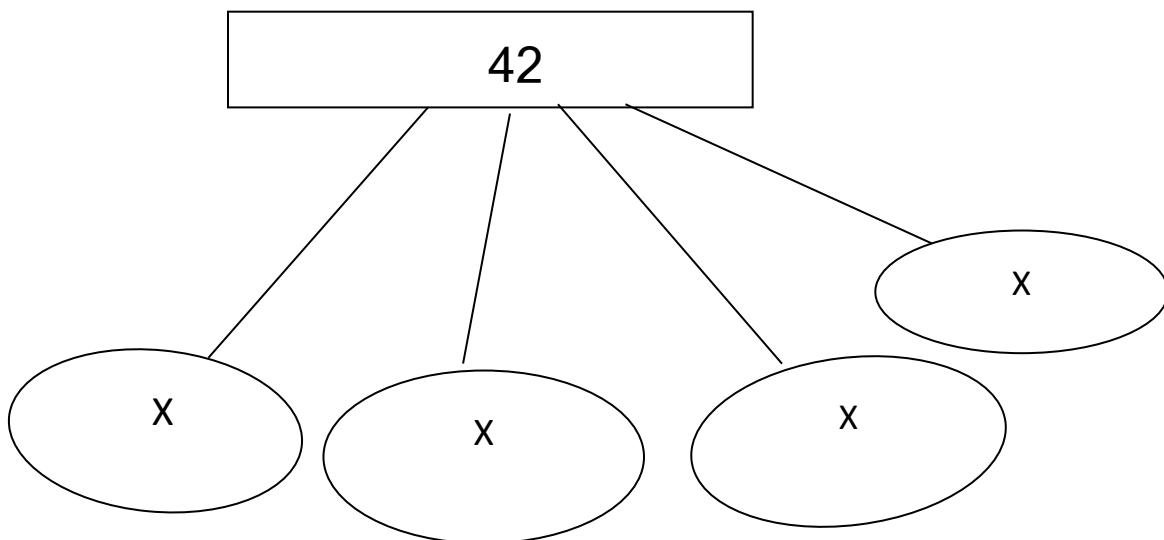
4. Add-

i) Rs. 35 + Rs. 65 = _____ ii) Rs. 35.50 + Rs. 29 = _____

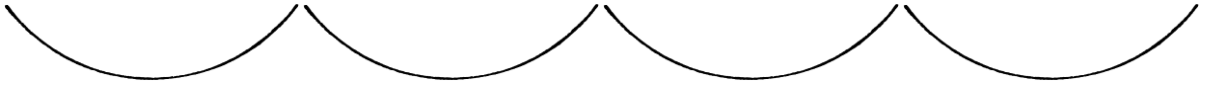
5. Subtract –

i) Rs. 29.50 – Rs. 7.75 = _____ ii) Rs. 108.25 – Rs.39 = _____

6. Complete the following multiplication tree.



7. Distribute 16 beads into 4 equal groups.



8. How much money do the following notes and coins make ?





9. Complete the following patterns.

i) 22 24 26 28 _____

ii) 15 18 21 24 _____

10. A gardener has planted 8 rows of saplings in his garden. Each row has 12 saplings. How many saplings are there in the garden?

11. What do these secret messages say?

i) OIO AOMO WOROIOTOIONOGO AONO EOXOAOM.

ii) 5I 5S5H5O5U5L5D5 C5H5E5C5K5 M5Y5 P5A5P5E5R5 A5G5A5I5N5
A5N5D A5G5A5I5N.

12. Look at the price list and find out the total cost of –

Price List	
a ball	Rs. 10
an eraser	Rs. 3
a pencil box	Rs. 25
a pen	Rs. 15
a sharpener	Rs. 4.50

i) an eraser and a sharpener - _____

ii) 2 balls and a pen - _____

IV. Answer the following.

(16)

1. Observe the patterns and fill in the blanks.

i) 16 A 18 B 20 C 22 D _____ _____

ii) 1 2 4 8 _____

2. Look at the calendar and answer the questions given below it.

MARCH 2018						
SUN	MON	TUE	WED	THU	FRI	SAT
				1	2	3
4	5	6	7	8	9	10
11	12	13	14	15	16	17
18	19	20	21	22	23	24
25	26	27	28	29	30	31

www.free-printable-calendar.com

A. Shade the following dates in the calendar.

i) 30th March 2018 ii) 6th March 2018

B. On which days of the week do the following dates fall?

i) 14th March 2018 - _____ ii) 19th March 2018 - _____

C. What will be the dates on –

i) the first Sunday of April 2018 - _____

ii) the second Sunday of April 2018 - _____

D. Colour all the Thursdays of March 2018 in red.

3. Multiply-

i) 26 x 5

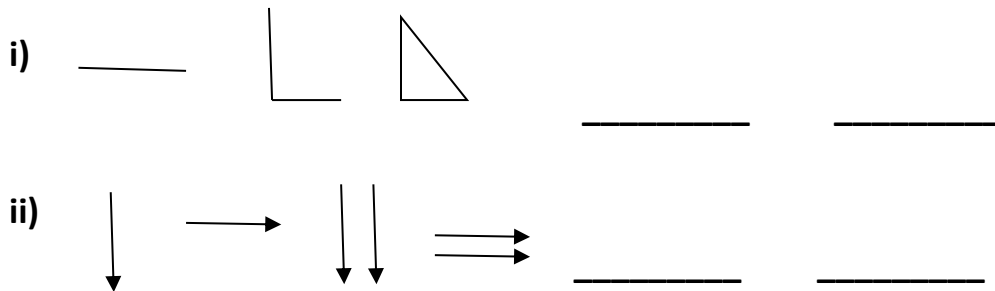
ii) 59 x 3

4. A train goes from Toytown to Jerryngar. On its way it stops at a few stations. The cost of a rail ticket and the distances from Toytown to the different stations it passes is given in the table below. Look at it and answer the questions that follow.

Distance from Toytown (in km.)	Station	Fare (Rs.)
38	Mickeyland	15.50
120	Donaldhouse	54.00
200	Jerryngar	89.00

1. What is the cost of a ticket from Toytown to Donaldhouse? _____
2. Find the distance between Mickeyland and Jerryngar. _____

5. Draw the correct figures and complete the patterns.



- V. Solve the following. (4 x 3 = 12)

1. Multiply using the box method.
35 x 12

2. Seema bought things for Rs. 75.50. She has a 50- rupee note, 2 five rupee coins and 2 ten rupee coins. Does she have enough money to pay the shopkeeper ? If not, how much money should she borrow from her friend ?

3. The following table shows the number of students of Class 3 belonging to different houses.

House	No. of children
Red	35
Blue	36
Green	39
Yellow	42

Look at the table carefully and fill in the blanks.

1. Most of the students belong to the _____ house.
2. 39 children belong to the _____ house.
3. _____ house has 7 less number of students than the _____ house.
4. The total number of students in Class 3 is _____.

-----XXXXX -----