

ATOMIC ENERGY EDUCATION SOCIETY
TERM-2 EXAMINATION

Subject: English

Class- III

Max Marks: 80

Name : _____

Sec : _____

Time: 3 Hours

Section- A: Knowledge (35 Marks)

Section- B: Understanding (25 Marks)

Section- C: Application (20 Marks)

Section- A: Knowledge

(35 Marks)

A1. Answer the following questions.

(5)

a) What is the vegetable man selling?

Ans: _____

b) Who is 'I' in the poem 'Puppy and I'?

Ans: _____

(c) What did the tiger cub catch one night?

Ans: _____

d) What does the camel eat in the desert?

Ans: _____

(e) What does the baby do with the pebbles?

Ans: _____

A2. Give one word for the following.

(1 X 4 = 4)

a) A box outside a person's house where letters are put.

b) When children behave badly or do not do what they are told to do, they are

c) A person who makes us laugh

d) One who travels in a spacecraft is an

A3. Correct the sentences.

(1 × 4 = 4)

a) The man felt happy for Meena.

b) The tiger cub caught a rat one night.

c). The sparrow says tring-a-ling.

d). The boy went with the horse.

A4. Number the given sentences in the correct order.

(1 × 4 = 4)

With letters, two or three.

But never one for me.

Most always, when the postman comes.

They're for my Mother or my Dad

- A5. Name the following. (1 × 4 = 4)
- a). A means of air transport. _____
 - b). An animal that swings by its tail. _____
 - c). One who brings our letters. _____
 - d). The ship of the desert. _____

- A6. Fill in the blanks. (1 X 2 = 2)
- a) Mother, your baby is so very _____.
 - b) The trains run over mountains and plains carrying _____ and mail.

- A7. Answer the following questions: (3 X 2 = 6)
- a). Write three lines on tiger.

- b). Write three things you will do when you grow up.

- A8. Write a paragraph on train journey (5)

- A9. Make sentences on the following words: ($\frac{1}{2}$ X 2 = 1)
- a). Proud : _____
 - b). Awake: _____

Section- B: Understanding

(25 Marks)

- B1. Read the following passage and answer the questions.

Once there lived a cap seller who sells caps in the market. One day he was passing through a forest to go to a village carrying a basket full of caps on his head. He felt tired, and fell asleep. After sometime, he woke up and he found his basket empty. He was worried, and saw some monkeys sitting on the tree wearing the caps. He made a plan to get his cap. He removed his cap and threw it on the ground. At once all the monkeys took off the caps they were wearing and threw them down. The cap seller collected quickly and went away.

- 1) What did the cap seller sell? (1)

- 2) Give a suitable title for the story. (1)

- 3) From the story pick out the past tense for: (1)

(a) throw- _____ (b) feel- _____

- 4) From the story pick out opposite for: (1)

(a) full X _____ (b) standing X _____

- 5) From the story pick out the rhyming word for: (1)

(a) where - _____ , _____

(b) pound - _____ , _____

B2. Read the poem carefully and answer the following questions:

Tooth Truth

I have a little space
in the middle of my face,
And in that space,
there used to be a tooth.
It was little,
It was white,
And it just fell out one night,
and a fairy came and took it-

that's the truth!
The fairy left me money
when she took my tooth away
took it from the pillow it was under.
What do fairies want with teeth
that they get from underneath
my pillow as I'm sleeping?
That, I wonder.

B.2.1. Tick the correct options and fill in the gaps.

(1 X 2 = 2)

1) The child kept her tooth under the _____.

a) window b) pillow c) bed d) table

2) It was a little _____ tooth.

a) light b) bright c) quite d) white

B.2.2. Write two pairs of rhyming words from the poem in the blanks.

(1 X 2 = 2)

1) _____ - _____

2) _____ - _____

B.2.3. Answer the question.

(1 X 1 = 1)

What did the fairy leave for the child when she took her tooth away?

B3. Answer the questions based on the given extract.

(1 X 5 = 5)

Camel: Look at my feet. They are thick and padded. The hot sun does not burn them.

Lion: My feet are padded too. Thorns don't prick them and I can run 80 kilometres an hour.

Camel: That is true. You can run 80 kilometres an hour in the forest but can you run even a mile on the hot sand?

Lion: May be not.

B.3.1. Why doesn't the hot sun burn a camel's feet?

B.3.2. Can a lion run on the hot sand?

B.3.3. At what speed can a lion run?

B.3.4. How does a lion's padded foot help him?

B.3.5. Write the rhyming word of the following:

(a) Sand X _____ (b) Thick X _____

B4. Look at the picture and write 5 sentences about it

(5)



कक्षा- तीन विषय-हिन्दी पूर्णांक – 80
नाम ----- वर्ग ----- रोल न -----

प्रश्न 1. पठित गद्यांश पढ़ो और प्रश्नों के उत्तर लिखो ।

उसी दिन शाम को मैं एक बर्र को पकड़ने की कोशिश कर रहा था कि उसने काट खाया । बड़ी जोर से दर्द उठा । मुझे दर्द से करहाते देखकर नानी ने सोचा कि साँप ने काट लिया है । मैंने दौड़कर नानी को उँगली दिखाई । उन्होंने जल्दी से नाना को पुकारा । नाना तुरंत दौड़े आए और मेरी उँगली को देखा । जहाँ बर्र ने काटा था , वहाँ नीला निशान पड़ गया था ।

1- बच्चा क्या पकड़ने की कोशिश कर रहा था ? 1

उत्तर - -----

2- बच्चे ने अपनी उँगली किसे दिखाई ? 1

उत्तर - -----

3- गद्यांश से छॉटकर खाली जगह भरो । 1

नाना तुरंत ----- आए और मेरी ----- को देखा ।

4- गद्यांश से डंक मारने वाला जंतु छॉट कर लिखो । 1

उत्तर - -----

5- दिए गए शब्दों के विलोम शब्द लिखो । 1

शाम ----- जल्दी -----

6- शब्दों के अर्थ लिखो । 1

कराहना ----- पुकारना -----

7- बिंदी या चंद्रबिंदी लगाकर शब्द को दुबारा लिखो । 1

उगली ----- तुरत -----

8- लिंग बदलो 1

नानी -----

9- वाक्य बनाओ । 1

दर्द - -----

10- इस गद्यांश में मैं शब्द किसके लिए प्रयोग किया गया है ? 1

उत्तर - -----

प्रश्न 2. अपठित गद्यांश पढ़ो और प्रश्नों के उत्तर लिखो ।

नीम भारत का जाना- पहचाना वृक्ष है । बबूल की तरह इसके बीज बरसात में उग जाते हैं । गाँवों में आँगन ,खेत की मेड़ों तथा बगीचों में नीम के वृक्ष लगाने की परम्परा बहुत पहले से चली आ रही है । नीम की पत्तियों को गेहूँ, जौ चने में कीटनाशक के रूप में प्रयोग किया जाता है । नीम की दातुन दाँत के रोगों तथा कीड़ों से बचाव कर दाँतों को मजबूत करती है । नीम की छाल घाव में मरहम का काम करती है। नीम का अर्क पीने से खून साफ होता है ।

1- उपरोक्त गद्यांश में किस वृक्ष का वर्णन किया गया है ? 1

उत्तर - -----

2- नीम की पत्तियों का प्रयोग किस रूप में होता है ? 1

उत्तर - -----

3- नीम का पेड़ कहाँ – कहाँ लगाया जाता है ? 1

उत्तर - -----

4- लोग नीम की दातुन का प्रयोग क्यों करते हैं ? 1

उत्तर - -----

5- समानार्थी शब्द लिखो । 1

गाँव - ----- भारत - -----

6- विलोम शब्द लिखो । 1

मजबूत - ----- साफ - -----

7- कीटनाशक शब्द का अर्थ लिखो । 1

उत्तर - -----

8- गद्यांश में आए दो अनाजों के नाम लिखो । 1

उत्तर -----

9- वचन बदलो । 1

दाँत - ----- को कीड़ा - ----- से

10- गद्यांश से ' ज्ञ और फ़ ' ध्वनि वाले शब्द छाँट कर लिखो । 1

उत्तर - -----

प्रश्न 3. एक शब्द में उत्तर लिखो । 1

(क) मिर्च का मजा कविता के कवि का नाम लिखो ।

उत्तर - -----

(ख) सब्जियों के नाम ढूँढ कर लिखो । 1

आ भागो भी बारिश होने लगी है । -----

मामू लीला मौसी कहाँ हैं -----

(ग) एक मात्रा बदलकर जोड़ा बनाओ जिसमें दोनों शब्दों के अर्थ अलग अलग हों । 1

बेल - ----- दिया - -----

(घ) शब्दों के अर्थ लिखो । 1

हुनर - ----- आवाज़ - -----

(ङ) लिखो इन कामों के लिये हम कहाँ जाते हैं ? 1

गेहूँ पिसवाने - ----- पंचर बनवाने - -----

प्रश्न 4. लघु प्रश्नों के उत्तर लिखो ।

1- अवंन्ती ने कपड़ा बंद कर दिया । क्यों ? 2

उत्तर - -----

2- शिवदास ने गुरुजी की थैली देखकर अपनी साइकिल क्यों दे दी ? 2

उत्तर - -----

3- बाघ की खबर पूरे गाँव में फैल गई । कैसे ? 2

उत्तर - -----

4- काबुलीवाले ने मिर्च को स्वादिष्ट फल क्यों समझ लिया ? 2

उत्तर - -----

5- घर की तलाश पर निकलने से पहले तीनों भाई कहाँ रहते होंगे ? 2

उत्तर - -----

प्रश्न 5. निम्नलिखित प्रश्नों के उत्तर लिखो।

1- किन्हीं दो चीजों के नाम लिखो जिनकी महक खाने से न जुड़ी हो । 1

उत्तर - -----

2- शब्दों को आगे पीछे करके वाक्य दुबारा लिखो ।

मुझे महक रोटी की आती । 1

रखी मेज पर है वो रोटी । 1

3- रोटी के अन्य कोई दो नाम लिखो । 1

4- डंक मारने वाले दो जन्तुओं के नाम लिखो । 1

5- शब्द के अलग – अलग अर्थ समझते हुए एक वाक्य में प्रयोग करो ताकि शब्द का दो अलग –अलग अर्थ स्पष्ट हो सके । 1

हार - -----

6- कविता की वह पंक्ति लिखो जिससे पता चलता है कि – मिर्च बहुत तीखी थी। 1

उत्तर - -----

7- कविता की पंक्ति को अपने शब्दों में लिखो । 1

– जा तू अपनी राह सिपाही , मैं खाता हूँ पैसा ।

उत्तर - -----

8- दो चीजों के नाम लिखो जिन्हें देखकर तुम्हारे मुँह में पानी आ जाता हो । 1

उत्तर - -----

9- किन्हीं दो पत्तों के नाम लिखो । जिनसे दूधिया रस निकलता हो । 1

उत्तर - -----


10- लिखो दातुन को दातुन क्यों कहते हैं ? 1

उत्तर - -----

11- किन्हीं दो फलों के नाम लिखो जिन्हें छिलके के साथ नहीं खा सकते ? 1

उत्तर -----

12- चित्र देखकर मुहावरा लिखो । 1



13- मिर्च का मजा कविता में आये शरीर के दो अंगों के नाम लिखो । 1

उत्तर -----

14- बहुवचन बनाओ । 1

छीमी - ----- आँख - -----

प्रश्न 6 . गलत लिखे शब्दों को शुद्ध करके लिखो । 2

बिरस्पतिवार - ----- नमसते - -----

आसरम - ----- चटाइयां - -----

प्रश्न 7. वाक्य शुद्ध करो । 2

1 - धूप बैठकर ढोकला खाया । -----

2 - लता सब मूँगफली खिलाई । -----

प्रश्न 8 . शब्दों का वाक्यों में प्रयोग करो । 2

धीरे - धीरे -----

पीछे - पीछे -----

प्रश्न 9. कविता की पंक्तियाँ पूरी करो। 4

पर काबुल का ----- लाल छीमी से क्यों ----- मोड़े ?

----- हुआ जिस पर उसको क्यों बिना ----- छोड़े ?

एक ----- फेंक और ----- अपनी फैलाकर,

----- से बोला बेचारा ----- त्यों कुछ समझाकर।


प्रश्न 10. दिये गये प्रश्न का उत्तर लिखो । 5

जब साँप नारियल के खोल में घुस गया तो मैंने क्या किया था ? मैंने ऐसा क्यों किया होगा ?

उत्तर - -----

प्रश्न 11. - दिए गए चित्र को ध्यान से देखो और पाँच वाक्य लिखो ।

5



उत्तर -

प्रश्न 12. आफंती अथवा पेड़ों की उपयोगिता पर एक अनुच्छेद लिखो ।

5

उत्तर -

प्रश्न 13. अनुच्छेद देखकर सुलेख लिखो ।

5

एक बार कछुए और खरगोश के बीच दौड़ प्रतियोगिता शुरू हुई । खरगोश तेजी से चलकर काफी दूर निकल गया और आराम करने लगा । आराम करते - करते उसे नींद आ गई । उधर कछुआ धीरे - धीरे लगातार चलता हुआ आगे निकल गया । तभी खरगोश की नींद खुली और अपने आप को पीछे हुआ देखकर सबक देने लगा - आराम हराम है ।

ATOMIC ENERGY CENTRAL SCHOOL NO.4

SUB – MATHS

PRACTICE PAPER

CLASS-3

Name..... Class/Sec..... Roll No..... Max Marks: 80

Invigilator's Signature:-..... Examiner's Signature: MO.....

Q.1 Choose the correct answer and fill in the blanks [10]

- a. Two cats havelegs (4,8,6)
- b. There areten rupee notes in 50(5,11,10)
- c. A bucket holds 10.....of water (litre,milliliter)
- d. 6 times of 3 is equal to(5,12,18)
- e. $52 \div 4 =$ (13,16,18)
- f. Odd number +1=number (even,odd,none)
- g. 1 kilogram ofneeds a smaller bag (rice, sugar, groundnuts)
- h. a,b,c,,a,b,c,ac (c,a,b)
- i..... fans has three blades. [3,6,4]
- j.4 Kg=..... g.[4000g,4400g,5000g]

Q.2 Fill in the blanks. [6]

- a. $56 \times$ = 56
- b. $5+5+5+5 =$ $\times 5$
- c. 2500 grams =kilogram
- d. 2 fifty paise =rupee
- e. The cost of 1 candy is 2 rupees then the cost of 5 such candy isrupees.
- f. 30 pencils are to be equally distributed among 5 children then each child will getpencils.

Q.3 Match the following [6]

- | | |
|---------------------------|---------------------|
| a. weight of a watermelon | Rs.30 |
| b. 500 ml | 28 days |
| c. cost of a pencil box | even number |
| d. 3×7 | 3 kg. |
| e. February | 21 |
| f. 84 | $\frac{1}{2}$ litre |

Q. 4 True or False [6]

- 1. Three notes of 10 make 50 rupees [True/False]
- 2. $25 \times 0 = 0$ [True/False]
- 3. The double of 8 Kg is 14 Kg [True/False]
- 4.24 is an even number. [True/False]
- 5. Children day celebrated on 5 th September. [True / False]
- 6. A Spoon holds 2 liter of water. [True/False]

Q. 4 Do as directed

[20X2=40]

1. Write all the even numbers between 593 and 601 : _____, _____, _____, _____,

2. Which will require a big bag ?

a. 1 kg apple or 1 kg groundnuts

b. 1 kg dry red chilli or 1 kg sugar

3. Prachi teaches 6 hours a day in a school. She work 6 days a week. How many hours does she work in a week?

.....
.....

4. Write the names in alphabetical order

Shipra Anushka Monika Tanushree

.....

5. Write the names of any two things that will hold less than 1 litre water

.....

6. Multiply 16 x7

X		

7. Complete the pattern

1, 5, 10, 15, 20,,

8. Subtract

72.00

- 12.50

9. Rishika has Rs 42.50 and Shriya has Rs.24.00 . How much money they have in all?

Rs.....

10. 26 strawberries of same size weight 1 kg then

.....strawberries weight 2 kg

..... strawberries weight ½ kg

11. Put 42 apples equally in 2 baskets. Each baskets has..... apples.

..... ÷ =

12. Monika had to pour 10 mugs of water to fill a bucket. Shreya had to pour 20 mugs of water to fill the same buckets.

a. Whose mug holds less water.....

b. Monika mug can hold as much as shreya mug.

13. 75 pencils are to be packet in 5 boxes equally. How many pencils will be there in each box?

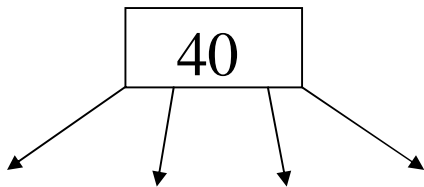
.....

14. Complete the following.

a. $6 \times \dots = 48$


b. $\dots \times 7 = 49$

15.



16. If a jug holds 3 glasses of water, then how many glasses of water is needed to fill 3 such jugs. _____

17. Draw the hands on the clock. [2:30]



18. Ayushi has Rs.124.25 and Priya has 115.50. Who has more money and how much?

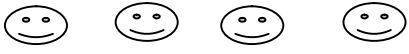
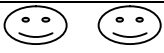


19. 30 pencils are to be equally distributed among 5 children. Then each child will get _____ pencils.

20. Complete the pattern.

201, 203, 206, 208, 211, _____, _____

Q4[a]. Given below are details of the number of students using different mode of transports.

[4]

Modes	School going students
Car	
Bicycle	
Bus	
bike	

- i) _____ students come to school by bus.
- ii) Three students come to school by _____
- iii) _____ students come to school by bicycle.
- iv) The total number of students are _____

[B] A frog jumps 3 steps at a time.

[4]

A lion jumps 30 steps at a time.

A rabbit jumps 5 steps at a time.

A kangaroo jumps 15 steps at a time.

- i. How many jumps of kangaroo is equal to two jumps of lion.
- ii. Who all will meet at 15.

Q5. Complete the cash memo.

[4]

Items	Rate per item (in Rs)	Total Co st (in Rs)
4 note books	7.00	
8 pencil boxes	25.00	
5 lunch boxes		25.00
	Total	

ATOMIC ENERGY CENTRAL SCHOOL NO: 4

PRACTICE PAPER

CLASS/SEC: III _____

SUBJECT: EVS L (12 to 24)

NAME: _____

ROLL NO. _____

M.M.-80

Sign of examiner- _____

M.O.- _____

Q.1.Fill in the gaps.

10m

- a) A dupatta is a long piece of _____ cloth.
- b) A _____ is a place where sick person are looked after.
- c) Krishna and Kaveri live with their _____.
- d) Madho's family people get _____ when they walk on the hot sand.
- e) _____ is a bird that cannot fly.
- f) The villagers of Rajasthan lived in _____ in earlier days.
- g) The colour of the postal van carrying letters is _____.
- h) Avantika explained to Nandita how to play _____.
- i) The clay pit wanted a _____ to dig the soil.
- j) Thread work done on cloth is called _____.

Q.2. Tick the correct answer.

(10m)

- a) We get sugar from- Banana Ajwain Sugarcane
- b) Blind people read books in a script known as-
Arabian script Braille script Manu script
- c) The man who cut the hair and shave is a- cobbler carpenter barber
- d) Surahi is made up of- clay soil iron
- e) The item not related to bricks is - clay kiln sand
- f) Spinach is obtained from this part of a plant- flower fruits leaves
- g) The game played in indoor- football cricket ludo
- h) In a toothache we use- turmeric tulsi clove
- i) The man who delivers letters- Doctor police man post man
- j) The man who controls traffic - watchman traffic policeman fireman

Q.3. Answer the following questions.

20m

a) Write 4 natural things-_____

b) Write 4 man-made things-_____

c) Name four directions-_____

d) Name 4 types of houses-_____

e) Write the material used in your house._____

f) Name any four animals that you can touch.

g) Name any four animals that you cannot touch.

h) Name four things which are use to keep the house clean-

i) Name four animals who carry loads._____

j) Name four foods which we get from animals.

Q 4. Which games did Chachi play in her childhood ?

[4]

Q.5. Write how many players from one side are required to play at one time in each of the games given below :-

[5]

Games	Numbers of players
1. Basketball -	-----
2. Tabletennis -	-----
3. Volleyball -	-----
4. Kabaddi -	-----
5. Sanke and ladders -	-----

Q.6. The first and the last steps in making a pot are given in the table below. Fill in the remaining steps. [8]

Step No.	What is done in the step
1.	Dig clay from a clay pit.
2.	-----
3.	-----
4.	-----
5.	-----
6.	Decorate the pot with colours.

Q .7.Fill in the blanks . [5]

1. Letters are put in a _____ for being sent.
2. All letters have _____ on them to indicate how much they cost to send.
3. Letters are taken by _____ over long distances.
4. Letters are taken by _____ over short distance.
5. Letters are delivered to our homes by a _____.

Q.8. Answer the following questions. (18m)

a) What is the similarity in the roof of Chameli's and Bhupen's houses?

b) How does Chandu Dhobi look after his donkey?

c) How does Madho's father fetch water?

d) Suggest any three ways of saving water.

e) Abbu enjoys watching television with the others. Why?

f) What differences do you find in their texture, their colour and designs of a cloths?

g) How are plants important to us?

h) How do you think Sajida's dupatta was made?

i) Who was cleverer , Phudgudi or Bhanate?Why?
