

Atomic Energy Central School, Rawatbhata

Half Yearly Examination-2019-20

Class : IV

Date of Exam : 24-09-2019

Time : 3 Hrs

Subject : English

Marks : 80

Student's Code No. : _____

Marks Obtained :

Invigilator's Sign : _____

Checker's Sign : _____

Examiner's Sign : _____

INSTRUCTIONS: 1) All questions are compulsory. 2) Write all the answers in good handwriting.
3) Read all the questions carefully.

Q.No	<u>READING SEEN PASSAGE (5 MARKS)</u>	MARKS
Q.1	Read the passage carefully and answer the following questions : It was the summer of 1880. A healthy baby girl was born in a small town in Alabama. Her parents loved her dearly and named her Helen Keller. But one day .The baby became ill and day after day, her fever stayed high. Everyone in the family tried to help her to get better, but all they could say was.”There is nothing more we can do. The baby may not live”. Helen lived. But she was not the same after her illness. “Something is very wrong ,” Her mother said. At last they found out what was wrong. The child could not see or hear. The baby grew into a little girl. Her parents felt very sorry for her. Helen often cried and held on to her mother.”Give the poor child what she wants,” her father would say. Though Helen could not hear or see, she was a bright little girl.	
A	Where was Helen Keller born ? Ans _____ _____ _____	1M
B	What kind of girl was she ? Ans _____ _____ _____	1M

C	Complete the sentence Helen lived. But _____ _____	1M
D	Fill in the blanks. 1) She was a _____ little girl. 2) The baby may not _____.	1M
E	Write the opposite word of :- big - _____	1M
Q.2	<u>READING SEEN PASSAGE (5 MARKS)</u>	
	Read the passage carefully and answer the following questions : “I wish I had gold leaves as goats do not eat gold leaves.”When the little fir tree woke up the next morning it was surprised to see gold leaves. “How happy I am !” it said. A man came along and stole the leaves. “I wish I had glass leaves instead . Men do not steal glass leaves.”The next day its glass leaves shone in the bright sun. “how happy I am !”it said. At night the wind blew whoo...oo...oo. All the glass leaves broke.	
A	Who stole the gold leaves ? Ans _____	1M
B	What happened at night with the fir tree ? Ans _____ _____	1M
C	Write true or false 1) Goats do not eat gold leaves. _____ 2) Next morning , its wish was not granted. _____	1 M

D	<p>Write the antonym of the following words</p> <p>1) dull _____</p> <p>2) huge _____</p>	2M
Q.3	<u>READING UNSEEN PASSAGE (10MARKS)</u>	
A	<p>Read the unseen passage carefully and answer the following questions :</p> <p>A salt seller used to carry the salt bag on his donkey to the market every day. On the way they had to cross a stream. One day the donkey suddenly tumbled down the stream and the salt bag also fell into the water .The salt dissolved in the water and hence the bag became very light to carry. The donkey was happy .Then the donkey started to play the same trick every day.</p> <p>The wise salt seller came to understand the trick and decided to teach a lesson to it. The next day he loaded a big cotton bag on the donkey. Again it played the same trick hoping that the cotton bag would be still become lighter. But the dampened cotton became very heavy to carry and the donkey suffered. It learnt a lesson. It didn't play the trick anymore after that day, and the seller was happy. * (dampened-wet, tumbled-fall suddenly, trick-skillful act)*</p> <p>Choose the correct words and fill in the blanks.</p> <p>1)They had to cross the _____</p> <p>a) river b)lake c)stream</p> <p>2)A salt seller used to carry the salt bag on his _____</p> <p>a) camel b) bullock c) donkey</p> <p>3) The opposite word of 'sad' is _____</p> <p>a) happy b) heavy c) clever</p> <p>4) The comparative form of the word 'light' is _____</p> <p>a) liter b)lighter c)ligter</p>	4M

B	What did the salt seller decide to do ? Ans _____ _____	1M
C	Why did the salt bag become lighter ? Ans _____ _____	1M
D	Pick out any two describing words (adjectives) from the passage 1) _____ 2) _____	2M
E	Write the words that means the same (synonyms) from the passage. 1) wet _____ 2) skillful act or idea _____	2M

Q.4	<u>TEXTUAL QUESTIONS (10 MARKS)</u>	
A	<p>Answer the following questions in one or two words:</p> <p>1) Who wrote the poem , ‘Don’t be afraid of the Dark ?</p> <p>Ans _____</p> <p>2) Write any one word which Miss Sullivan wrote on Helen’s hand.</p> <p>Ans _____</p>	2M
B	<p>Who said these words to whom ?</p> <p>1) “Wake up, dear ! Wake up fast.</p> <p>Ans _____</p> <p>2) “No one can match my skill in archery.</p> <p>Ans _____</p>	2M
C	<p>Answer the following questions in one or two sentences.</p> <p>1) Why is a nose important for us ?</p> <p>Ans _____</p> <p>_____</p> <p>2) Which creatures wake up in the morning before the child does?</p> <p>Ans _____</p> <p>_____</p> <p>_____</p> <p>3) Name any two things that sink.</p> <p>Ans 1) _____</p> <p>2) _____</p>	6M
Q.5	<u>CREATIVE WRITING: (10 MARKS)</u>	

A Write five sentences about your favourite cricket player. Clue words are given below.

5M

eight hours

practices

batsman

Indian

runs every day

outdoor

eats healthy food

B Write five sentences about the picture given bellow. You may use the clue words given below :

parrot	boy	river	butterfly	children
sitting	planting	flowing	flying	playing



Q.6	<u>GRAMMAR:(15 MARKS)</u>	
A	<p>DO AS DIRECTED :</p> <p>Complete the following sentences ,choosing the right words from the brackets.</p> <p>1)The sum was _____difficult for the class to solve. Only_____ students could do it. (two, too)</p> <p>2)Ramu’s _____loved to play in the _____ . (son ,sun)</p>	2M
B	<p>Write the full forms of :</p> <p>1) haven’t _____</p> <p>2) don’t _____</p>	2M
C	<p>Fill in the blanks using ‘was’ or ‘were’</p> <p>1) Nasruddin _____chatting with his friends.</p> <p>2) The cows _____grazing in the field.</p>	1M
D	<p>Fill in the blanks with the correct words as shown in the example:</p> <p>Example : small smaller smallest</p> <p>1) short _____ _____</p> <p>2) good _____ _____</p>	2M
E	<p>Rearrange the words to make a question :</p> <p>already /are /awake /who</p> <p>Ans _____</p>	1M

<p>F</p>	<p>Punctuate the following sentence :</p> <p>hey nasruddin is this your best aim</p> <p>Ans _____</p>	<p>1M</p>
<p>G</p>	<p>Write the compound words :</p> <p>1) Hill + side = _____</p> <p>2) Moon + light = _____</p> <p>3) Rain + drops = _____</p> <p>4) Break + fast = _____</p>	<p>2M</p>
<p>H</p>	<p>Write the plural form of :</p> <p>1) leaf _____</p> <p>2) child _____</p>	<p>2M</p>
<p>I</p>	<p>Connect the pair of sentences given below using ‘and’ or ‘but’</p> <p>Everyone has gone to slip</p> <p>I want to read my story books</p> <p>Ans _____</p> <p>_____</p> <p>_____</p>	<p>1M</p>
<p>J</p>	<p>Rewrite the given sentence with the correct opposite for the underlined word :</p> <p>The glass of milk is <u>full</u>.</p> <p>Ans _____</p>	<p>1M</p>

Q.7	<u>VOCABULARY (10 MARKS)</u>	
A	<p>Give one word for the given words :</p> <p>1) Informal talk _____</p> <p>2) Speak very slowly _____</p>	2M
B	<p>Write the opposites of the words given below by adding –‘un’ or ‘im’</p> <p>1) pure _____</p> <p>2) safe _____</p> <p>3) fair _____</p> <p>4) possible _____</p>	4M
C	<p>Write the name of the game where these rules are used</p> <p>1) Goal _____</p> <p>2) Run out _____</p>	2M
D	<p>Write the meaningful sentences with</p> <p>1) curious</p> <p>Ans _____</p> <p>2) dark</p> <p>Ans _____</p>	2M

Q.8	<u>SPELLING (10 MARKS)</u>	
A	<p>Some letters are missing in each word .Write ‘ea’ or ‘ee’ in each word</p> <p>1) pl__ __ se</p> <p>2) tr__ __s</p> <p>3) sl__ __py</p> <p>4) r__ __ dy</p>	2M
B	<p>Encircle the correct spelling</p> <p>1) funiest funniest funnyiest</p> <p>2) snuggles snuggls snugles</p>	2M
C	<p>Rearrange the following words to make meaningful sentences :</p> <p>jumped /the / hole / rabbit / Alice /too / into</p> <p>Ans-_____</p> <p>a / clock /inside / there / is / you</p> <p>Ans_____</p>	2M
D	<p>Put the correct letters in the right order to make meaningful words :</p> <p>1) rstign _____</p> <p>2) arlam _____</p> <p>3) sacmpre _____</p> <p>4) medawo _____</p>	4M

परमाणु ऊर्जा केंद्रीय विद्यालय, रावतभाटा

अर्द्धवार्षिक परीक्षा (2019-20)

कक्षा – चतुर्थ

दिनांक : 20/09/2019

समय : 3 घंटे

विषय : हिन्दी

पूर्णांक : 80

विद्यार्थी का कोड सं. : _____

प्राप्तांक :

निरीक्षक के हस्ताक्षर : _____

जाँचकर्ता के हस्ताक्षर : _____

परीक्षक के हस्ताक्षर : _____

प्रश्न 1 - पठित गद्यांश पढ़कर नीचे लिखे प्रश्नों के उत्तर लिखो ।

बादशाह अकबर अपने मंत्री बीरबल को बहुत पसंद करता था। बीरबल की बुद्धि के आगे बड़े-बड़ों की भी कुछ नहीं चल पाती थी । इसी कारण कुछ दरबारी बीरबल से जलते थे । वे बीरबल को मुसीबत में फँसाने के तरीके सोचते रहते थे । अकबर के एक खास दरबारी ख्वाजा सरा को अपनी विद्या और बुद्धि पर बहुत अभिमान था । बीरबल को तो वे निरा बालक और मूर्ख समझते थे ।

(क) बीरबल किसके दरबार में मंत्री थे ?

1

उत्तर _____

(ख) किसकी बुद्धि के आगे बड़े-बड़ों की भी कुछ नहीं चल पाती थी ?

1

उत्तर _____

(ग) बीरबल को मुसीबत में फँसाने के तरीके कौन सोचते रहते थे ?

1

उत्तर _____

(घ) किसको अपनी विद्या और बुद्धि पर बहुत अभिमान था ?

1

उत्तर _____

(च) ख्वाजा सरा बीरबल को क्या समझते थे ?

1

उत्तर _____

प्रश्न 2 - पठित गद्यांश पढ़कर नीचे लिखे प्रश्नों के उत्तर लिखो ।

पापा जब छोटे थे तो उनसे अक्सर पूछा जाता था कि आप बड़े होकर क्या बनना चाहते हैं । पापा का जवाब हमेशा तैयार होता । मगर उनका जवाब हर बार अलग-अलग होता था । शुरू-शुरू में पापा चौकीदार बनना चाहते थे। उन्हें यह सोचकर बहुत अच्छा लगता था कि जब सारा शहर सोता है, चौकीदार जागता है । उन्हें यह सोचना भी अच्छा लगता था कि जब हर कोई सोया हुआ हो, वह खूब शोर मचा सकते हैं । उन्हें पक्का यकीन था कि बड़े होकर वह चौकीदार ही बनेंगे ।

(क) पापा जब छोटे थे तो उनसे अक्सर क्या पूछा जाता था ? 1

उत्तर -----

(ख) पापा का जवाब हर बार कैसा होता था ? 1

उत्तर -----

(ग) शुरू-शुरू में पापा क्या बनना चाहते थे ? 1

उत्तर -----

(घ) विलोम शब्द लिखो । 1

बड़े - -----

(च) समान अर्थवाले शब्द लिखो । 1

यकीन - -----

प्रश्न 3 - अपठित गद्यांश पढ़कर नीचे लिखे प्रश्नों के उत्तर लिखो ।

सोनु और जीतू पक्के मित्र थे । दोनों दूसरे शहर जा रहे थे । बीच में घना जंगल था । अचानक दूर से उन्हें एक भालू आता दिखाई दिया, सोनु अपनी जान बचाकर भागा और पेड़ पर चढ़ गया । जीतू को पेड़ पर चढ़ने का मौका नहीं मिला । वह ज़मीन पर साँस रोककर बैठ गया। भालू ने जीतू को सूँघा और मरा समझकर वहाँ से चला गया । तब सोनु पेड़ से उतरा और जीतू से पूछा - भालू ने तुम्हारे कान में क्या कहा ? जीतू ने जवाब दिया कि जो मुसीबत में साथ छोड़ दे, ऐसे मित्रों से दूर रहना चाहिए ।

1- दोनों मित्र कहाँ जा रहे थे ?

1

उत्तर

2- दोनों मित्रों को जंगल में क्या आता दिखाई दिया ?

1

उत्तर

3- सोनु ने अपनी जान कैसे बचाई ?

1

उत्तर

4- भालू ने किसे मरा हुआ समझा ?

1

उत्तर

5 - जीतू ज़मीन पर क्यों बैठ गया ?

1

उत्तर

6- इस कहानी से तुम्हें क्या सीख मिलती है ? 1

उत्तर _____

7 - समान अर्थवाले शब्द लिखो । 1

मुसीबत - _____

8 - विलोम शब्द लिखो । 1

जवाब - _____

9 - खाली जगह भरो ।

(क) जीतू को पेड़ पर चढ़ने का _____ नहीं मिला । 1

(ख) भालू ने तुम्हारे _____ में क्या कहा ? 1

प्रश्न 4 - नीचे लिखे प्रश्नों के उत्तर लिखो ।

(क) बादल ढोल कैसे बजाते होंगे ? 1

उत्तर _____

(ख) दिनेश की माँ कौन-सी मशीन चला रही होगी? 1

उत्तर _____

प्रश्न 5 - नीचे लिखे प्रश्नों के उत्तर लिखो ।

(क) बादल नदी-नालों में बाढ़ कैसे लाते होंगे ? 2

उत्तर _____

(ख) अगर तुम रेल से सफर करोगे तो तुम्हें प्लेटफार्म और रेलगाड़ी में कौन-कौन लोग नज़र आएँगे ? 2

उत्तर _____

(ग) साल के किन-किन महीनों में ज्यादा बादल छाते हैं ? 2

उत्तर _____

(घ) संन्यासी ने सीधे-सीधे शब्दों में भिक्षा क्यों नहीं माँग ली ? 2

उत्तर _____

प्रश्न 6 जमाल साहब और नसीरुद्दीन के बारे में पाँच वाक्य लिखो । 5

प्रश्न 7 - बारिश (वर्षा) के मौसम में क्या-क्या होता है? पाँच वाक्य लिखो। 5

प्रश्न 8 -(क) समान अर्थवाले शब्द लिखो ।

2

बुद्धिमान ----- बेवकूफ -----

(ख) मुहावरों का वाक्यों में इस्तेमाल करो ।

2

कलई खुलना - -----

नाक-भौंह सिकोड़ना - -----

(ग) जिस मकान में दो मंजिलें हो, उन्हें दुमंजिला मकान कहते हैं । इन्हें क्या कहेंगे ? 2

जिस झंडे में तीन रंग हों -----

जिस स्कूटर में दो पहिए हों -----

(घ) नीचे लिखे शब्दों के विशेषता बतानेवाले शब्द लिखो ।

2

(जैसे - भड़कीली - अचकन)

----- दोस्त ----- पड़ोसी

(च) उदाहरण के अनुसार लिखो ।

2

नाना - नानी

मामा - ----- चाचा - -----

(छ) पानी बरसने की दो आवाज़ें लिखो ।

2

जैसे - टप - टप

(ज) अधूरे वाक्य पूरे करो । 1
मैं छोटे बच्चों को मुफ्त में आइसक्रीम दिया करूँगा ।
ऐसा लगता है कि -----

(झ) सरकंडे से क्या-क्या चीज़ें बनती हैं ? 2

प्रश्न 9 - अशुद्ध शब्दों को शुद्ध करके लिखो । 4
अजनबीयों ----- महीला -----
तिमंज़ीली ----- कीरकेट -----

प्रश्न 10 - नीचे लिखे वाक्यों को शुद्ध करके लिखो । 2
(क) छुट्टियाँ थीं गर्मी की ।

(ख) दिनेश खोज रहा था क्या ?

प्रश्न 11 - अधूरे शब्दों को पूरा करो । 2
शै ----- जि -----

प्रश्न 12 - समान तुक वाले शब्द लिखो । 2
भरेगा ----- चढ़ती -----

प्रश्न 13 - अपने घर में तुम इन्हें क्या कहकर बुलाते हो ? 2
पापा की माँ -----
माँ की माँ -----

प्रश्न 14 - सचमुच शब्द का इस्तेमाल करते हुए दो वाक्य बनाओ । 2

1 -

2 -

प्रश्न 15 - नीचे लिखे शब्दों को वर्णमाला क्रम में लिखो । 4

रोलो

टटोलो

खोलो

लहराओ

.....

.....

.....

.....

प्रश्न 16 - समान अर्थवाले दो शब्द लिखो । 2

जैसे - सूरज - सूर्य , रवि

पूर्व -

प्रश्न 17 - सुलेख (एक बार) लिखो । 5

सुनीता सुबह सात बजे सोकर उठी । कुछ देर अपने बिस्तर पर ही बैठी रही । वह सोच रही थी कि आज उसे क्या-क्या काम करने हैं । उसे याद आया कि आज तो बाज़ार जाना है । सोचते ही उसकी आँखों में चमक आ गई । सुनीता आज पहली बार बाज़ार जाने वाली थी ।

.....

.....

.....

.....

.....

.....

.....

.....

.....

.....

Class : IV

Date of Exam : 23-09-2019

Time : 3 Hrs

Subject : Mathematics

Marks : 80

Student's Code No. : _____

Marks Obtained :

Invigilator's Sign : _____

Checker's Sign : _____

Examiner's Sign : _____

Section A – Knowledge (20 Marks)

A-1. Tick the correct one and fill in the blanks. (6x1=6)

a) One litre = _____ Millilitres.

- i) 10 ii) 100 iii) 1000 iv) 500

b) Half an hour = _____ minutes.

- i) 30 ii) 60 iii) 360 iv) 90

c) An arch is a _____.

- i) square ii) triangle iii) rectangle iv) curved line

d) In a 12 hour clock, each time comes _____ in a day.

- i) twice ii) thrice iii) ones iv) None of these

e) It is unsafe to use medicines after _____.

- i) manufacturing ii) expiry iii) packing iv) unpacking

f) One Lakh = _____ thousands.

- i) 10 ii) 100 iii) 1000 iv) 500

A-2. Do as directed. (5x2=10)


a) Where have you seen a 24-hour clock being used? Name any two places.

b) Draw the strong wall pattern.



c) Draw a clock and show the given time by drawing minute and hour hands.

Time : 12:40 O'clock



d) Write the dates in figure

Fifth September 2018 - _____

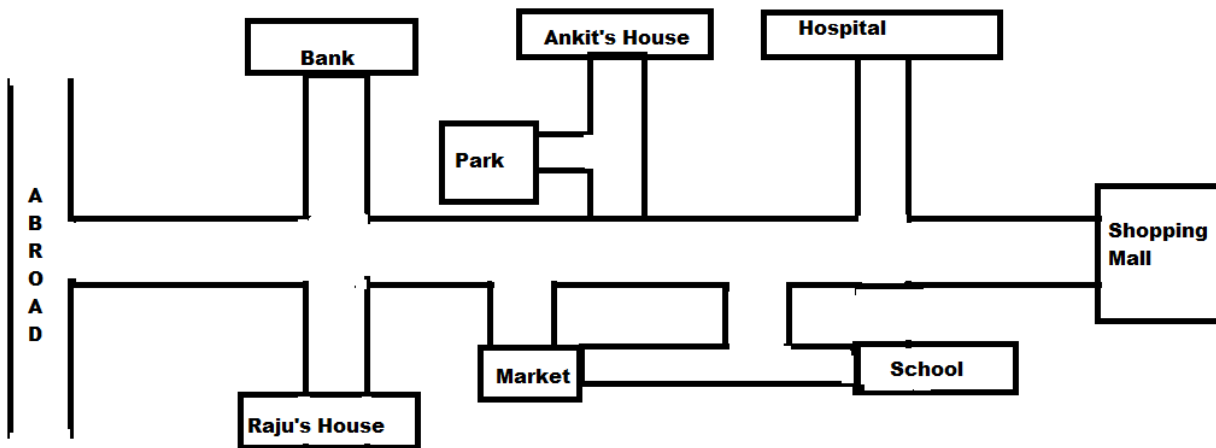
Second October 2019 - _____

e) Name the line segment given below and measure its length.

_____ Length = _____

A-3. Look at the map carefully and answer the following questions-

(4)



a) _____ is the opposite of Raju's House.

b) Park is nearer from _____ home.

c) School is very close to _____.

d) Shopping Mall is far from _____ home.

Section B – Understanding (20 Marks)

B-1. Choose the correct answer and fill in the blanks.

(6X1=6)

a) 1 litre = 2 x _____ millilitres

(500, 100, 200)

b) 1 m 95 cm is nearly _____

(2 m, 1 ½ m, 1 m)

c) There are four very old paintings. Which is the oldest painting? _____.

(4200 years old, 8500 years old, 1300 years old)

d) 20 Hours = _____ O'clock in the evening.

(9, 10, 8)

e) The biggest three digit number is _____.

(100, 999, 111)

f) This is _____ view of the player.



(side, top, front)

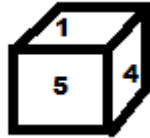
B-2. Do as directed.

(5X2=10)

a) Complete the following

Sr. No.	Time by 12-hour clock	Time by a 24-hour clock
1	1:40 O'clock in the afternoon	_____
2	_____	7:30 hours

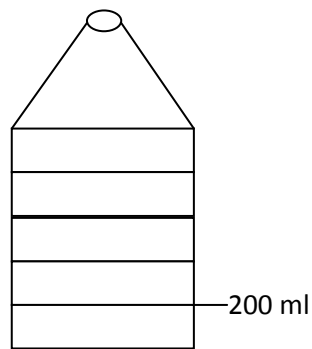
b) The numbers on the opposite side of this box are added up to 7.



Which number will be opposite of side 5? _____

Which number will be at the bottom? _____

c) Level the bottle in millilitres.



d) When you will see the Railway track from the above. How does it look like?

Draw the view.

e) Bholi is 120cm tall , her brother Bholu is 1m 36cm tall.

Who is taller? And how much taller?

B-3. Multiply by box method

(2x2=4)

a) 382×9

X			

_____ + _____ + _____ = _____

$382 \times 9 =$ _____

b) 78×56

X		

_____ + _____ + _____ + _____ = _____

$78 \times 56 =$ _____

Section C – Ability to compute (20 Marks)

C-1. Fill in the blanks.

(4x1=4)

a) 4 Times 500 = _____.

b) 5600 metres = _____ kilometres + 600 metres.

c) Number of days from 9th September to 15th September are _____

d) 9 notes of 20 rupees = _____.

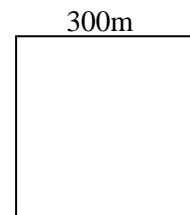
C-2. Find the answer.

(6X2=12)

a) Tarun's bottle holds 850ml of water. He has drunk 120ml of water and his friend shubham drunk 200ml of water from the same bottle. how much water is left in that bottle?

b) A person takes round of a square field. Its side is 300metres.

How much distance will he cover in one round?



c) Each bus takes about 20 minutes to refill and there are 5 buses to be refilled. How much hour and minutes will it take to be refilled all the buses?

d) Shabana was on leave from 27/08/2019. She joined the class on 06/09/2019. For how many days she was on leave.

Was she on leave for more than a week? _____

e) Kiran's mother is ill. she has to take 3 injections in a day for 7 days. She is given 10 ml of medicine in one injection ?

i) How much medicine will she need for one day?

ii) How much medicine will she needed for 7 days?

f) A junk seller buys the Brass for Rs. 170 per Kg. How much money will be paid for 30 Kg of Brass ?

C-3. Look at the table and answer the following questions .

(4)

Types of the bricks	Cost of the bricks
New bricks from Brickbad	Rs 1800 for one thousand bricks
Old bricks	Rs 800 for one thousand bricks
New bricks from Intapur	Rs 1000 for one thousand bricks

i) Dhanu bought 4 thousand new bricks from Brickabad. How much did he pay ?

ii) Rakesh bought two thousand new bricks from Intapur and one thousand old bricks. How much did he pay ?

iii) How much money will you pay for 500 new bricks from Brickapad?

iv) Which bricks are cheap in rate?

Section D – Problem Solving Ability (20 Marks)

D-1. Fill in the blanks

(4X1=4)

a) The shape of any face of a brick is _____

b) _____ml + _____ml + 750 ml = 1 litre.

c) A tea seller earn Rs. 60 per day. He will earn Rs. _____ in a week.

e) Take away 30 from 70 . It will give _____.

D-2. Solve the following

(6X2=12)

a) The cost of 1 litre petrol is Rs. 76. How much money will you pay for 13 litres of petrol ?

b) Rita comes to school from very far. She first walks about 400 m to the pond. Then she walks 150 m through the pond. Next she runs across the 350 m wide green field. Then She carefully crosses the 60 m wide road to reach her school. How much does she walk everyday to reach school ?

c) The students of classes I to V are going for picnic. Total no. of students 210. 10 students are absent. If one bus can carry 40 students. How many buses are required to carry the all students ?

d) On 15 May 2018 Charu went to a shop to buy butter. She checked the packet to see if the butter was safe to eat. It was written in the packet-“ **best before 180 days from the date of packing**”. Then she checked the date of packing. **The date of packing was written as 15/01/2018.**

i) Which month will it be 180 days after 15/01/2018 ? _____

ii) Can Charu eat it on 15/05/2018 ? _____

e) Suhasini was born on 18/02/2017.

i) When will She celebrate her first birthday ? _____

ii) In which month was she born? _____

f) The water used in one day by a family of 5 people is shown in the table.

Activity	Water in litres
1. Cooking and drinking	30 L
2. Washing clothes	40 L
3. Cleaning pots and pans	20 L
4. Bathing	75 L

How many litres of water a family use in a day ?

How much water will they need for one week?

- D-3. There are different vehicles which are running to the Wonder Park. Each vehicle has a different ticket price and time taken. (4)

Name of the vehicle	Ticket Price	Time Taken
Deluxe bus	Rs. 60	30 minutes
Mini Van	Rs. 45	40 minutes
Ordinary bus	Rs. 30	50 minutes
Luxury car	Rs. 100	20 minutes

a) Which vehicle take 1 hour to complete two trips ?

b) Ramesh visited the Wonder Park twice by different vehicles and paid Rs. 130 in all. Which two vehicles did he hire ?

c) A group of people took Ordinary bus. They paid Rs. 1500. How many people were there in the group ?

d) Golu and his friend has only Rs. 60 in all. Which vehicle will they hire for the trip of Wondar Park ?

Class : IV

Date of Exam : 25-09-2019

Time : 3 Hrs

Subject : EVS

Marks : 80

Student's Code No. : _____

Marks Obtained :

Invigilator's Sign : _____

Checker's Sign : _____

Examiner's Sign : _____

SECTION-A (30 MARKS)

I. A. Fill in the blanks.

(5X1m=5m)

(a) The _____ female is the leader of elephants' herd.

(youngest/ oldest)

(b) Litchi trees come to flower in the month of _____.

(October/ February)

(c) The route from Goa to Kerala has a total of _____ bridges. **(200/2000)**

(d) Mother's elder sister is called _____ in Malayalam.

(Ammumma / Valiyamma)

(e) Arrival of a bride brought a change in _____ family. **(Nazli's/Nimmi's)**

B. State whether True or False.

(5X1m=5m)

(i) Oil dissolves in water. []

(ii) Dera Gazikhan is in India. []

((iii) Ferry is a kind of boat used to travel from one place to another. []

(iv) Malyalam is spoken in Kerala . []

(v) An elephants sleeps 14 to 15 hours in a day. []

C. Find out the given place in word grid and circle them.

(5X1m=5m)

- (i) Station from which Omana started her journey.
- (ii) District which is famous for **Itr** production in Uttar Pradesh
- (iii) Amrita lived in this village.
- (iv) In this state, small wooden boat vallam is used.
- (v) Konkani is spoken in this state.

A	K	A	N	N	A	U	J	W	N
D	H	W	G	U	J	A	R	A	T
G	E	A	R	R	Y	U	I	O	R
H	J	S	T	K	D	D	D	G	P
M	A	H	M	E	D	A	B	A	D
C	D	S	D	R	B	R	V	K	E
H	L	F	M	A	G	H	J	K	S
L	I	V	R	L	A	G	O	A	T
R	X	C	T	A	D	T	I	O	U


D. Write short answers.

(5X2m=10m)

1. Put the names of animals in the table below.

	Ears cannot be seen	Has hair on skin
1		
2		

2. See the picture and write the answer.



(a) What we call the group of elephants? _____

(b) How much an adult elephant can eat in one day?

Ans. _____

3. See the picture and write the answer.



(a) What is the name of design given in the picture? _____

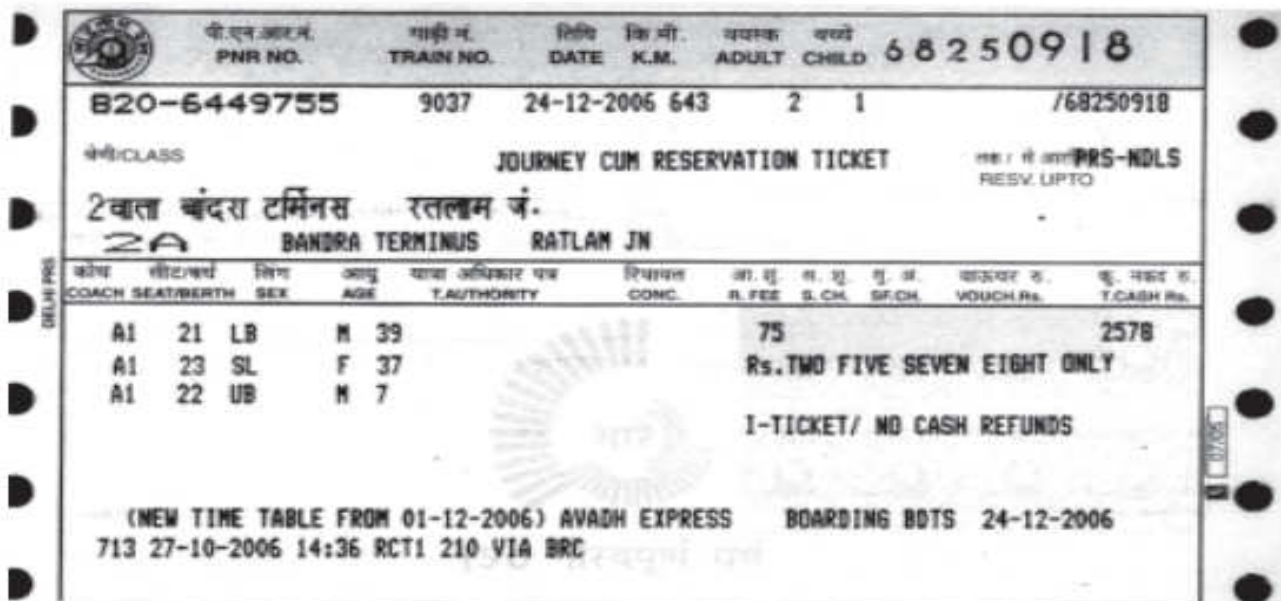
(b) Which type of colours are used in this design?

Ans. _____

4. Write two reasons which causes change in family.

Ans. _____

5. Observe the given railway ticket and write the answer.



(a) PNR Number-_____ (b) Train Number-_____

(c) Number of passengers-_____ (d) Date of journey-_____

E. Write 5 sentences on Khejadi Tree or Karnam Malleshwari.






5M

Ans. _____

SECTION-B (25 MARKS)

II.A. Identify the pictures and write the names.

(5X1m=5m)

	<p>(a)</p>
 <p>shutterstock.com - 1416707231</p>	<p>(b)</p>
	<p>(c)</p>
	<p>(d)</p>
	<p>(e)</p>

B. Give two examples for each.

(5X1m=5m)

- (1) Flowers used for making scent _____, _____
- (2) Insects which live in group _____, _____
- (3) Plants which do not have flowers _____, _____
- (4) Trees whose wood do not get affected by insects _____, _____
- (5) Games in which central line is important _____, _____.

C. Give reasons.

(2x2=4m)

1. Numbers of tigers are going down in India.

Ans. _____

2. There was so much smoke and noise from the vehicles at the level crossing.

Ans. _____

D. Write short answers.

(3x2m=6m)

(i) Write two works of worker bee.

Ans. _____

(ii) Write 2 differences between cement and bamboo bridge?

	Bamboo Bridge	Cement Bridge
1		
2		

(iii) What was the difference in the scene that Omana saw from the train on the first day and on the second day?

First Day	Second Day

E. Write the work of :-

(1X5m=5m)

(i) Carpenter-_____

(ii) Mason-_____

(iii) Ticket checker-_____

(iv) Coach-_____

(v) Coolie / porter-_____

SECTION-C (25 Marks)

III.A. Circle the odd one out.

(5X1m=5m)

- | | | | | |
|--------------|-----------|----------|--------|-----------|
| (a) Honeybee | Ant | Termite | Wasp | Snake |
| (b) Frog | Cow | Tiger | Cat | Fox |
| (c) Lizard | Sparrow | Parrot | Pigeon | Mouse |
| (d) Rose | Jasmine | Marigold | Lotus | Sunflower |
| (e) Valsad | Ahmedabad | Goa | Udipi | Kottayam |

B. Match the following places with their states.

(5X1m=5m)

- | | |
|------------------------|-----------------|
| (a) Khejadli Village | (i) Haryana |
| (b) Madhubani District | (ii) Gujarat |
| (c) Sohana Village | (iii) Karnataka |
| (d) Valsad | (iv) Rajasthan |
| (e) Udipi | (v) Bihar |

(a)_____ (b)_____ (c)_____ (d)_____ (e)_____

C. Write short answers.

(5X2m=10m)

(i) Why did king's men come to Amrita's village?

Ans. _____

(ii) How did Anita arrange money for bee-keeping?

Ans. _____

(iii) Write 2 reasons of water pollution.


Ans. _____

(iv) What is Girl Star?

Ans. _____

(v) Draw a picture showing any one way of cleaning the water and name it.

Ans.



D. Locate and shade the following state on the map.

(1X5m=5m)

- (a) Gujarat (b) Rajasthan (c) Bihar (d) Kerala (e) Goa



4 – English

Answer key

Q.N	Sub Q.	ANSWERS	Marks
Q.1	A	Helen keller was born in a small town in Alabama.	1 mark to correct answer
	B	She was a bright girl.	1 mark to correct answer
	C	But she was not the same after her illness.	1mark to correct answer
	D	1.bright 2 . live	1 mark to correct answer
	E	small	1 mark to correct answer
Q.2	A	A man came and stole gold leaves	1 mark to correct answer
	B	At night the wind blew harder and all the glass leaves broke.	1 mark to correct answer
	C	1.true 2. false	1 mark to each correct answer
	D	1.bright 2. little	1 mark to each correct answer
Q.3	A	1.stream 2.donkey 3.happy 4.lighter	1 mark to each correct answer
	B	The salt seller decided to teach a lesson to the donkey.	1 mark to correct answer
	C	The salt dissolved in the water and hence the bag became very light to carry	1 mark to correct answer
	D	1.heavy 2 light 3.happy 4 big 5.small	2 marks to any two correct answer
	E	1.Dampened 2. trick	1 mark to correct answer
Q.4	A	1.Ruskin Bond 2. DOLL WATER	1 mark to each correct answer
	B	1.Birds said to Neha 2.Nasruddin said to his friends	1 mark to correct answer
	C	1.Nose is important for us because we breathe air to live and we smell through it. 2. The birds, the bees, the cows, the horses , the ducks, the sheep and the chickens wake up in the morning before the child does. 3. Stone iron, bricks. Steel, any other correct response	2 marks to correct answer 2marks to correct answer 2 marks to any two correct answer
Q.5	A	Give 1 mark to each grammatically correct sentence Deduct $\frac{1}{4}$ marks to any grammar or spelling mistakes.	Give 5 marks to correct 5 sentnces
	B	Give 1 mark to each grammatically correct sentence Deduct $\frac{1}{4}$ marks to any grammar or spelling mistakes.	Give 5 marks to correct 5 sentnces

Q.6	A	1.To, two 2.son ,sun	1 mark to each correct answer
	B	1.Have not 2. Do not	1 mark to each correct answer
	C	1.was 2.were	$\frac{1}{2}$ mark to each correct answer
	D	1.Shorter shortest 2. better best	$\frac{1}{2}$ mark to each correct answer $\frac{1}{2}$ mark to each correct answer
	E	Who are already awake ?	1 mark to correct answer
	F	“Hey Nasruddin ! Is this your best aim?”	1 mark to correct answer. deduct $\frac{1}{4}$ to grammar and punctuation mistakes
	G	1.hillside 2.moonlight 3.raindrops 4.breakfast	$\frac{1}{2}$ mark to each correct answer
	H	1.leaves 2.children	1 mark to each correct answer
	I	Everyone has gone to slip <u>but</u> I want to read my story books.	1 mark to correct answer
	J	The glass of milk is <u>empty</u> .	1 mark to correct answer
Q.7	A	1.chatting 2.mutters	1 mark to correct answer
	B	1. Impure 2. unsafe 3.unfair 4 .impossible	1mark to each correct answer
	C	1.Hockey, football, 2.cricket	1mark to each correct answer
	D	Give 1 marks to each grammatically correct sentence.	Deduct $\frac{1}{4}$ marks to grammar or spelling mistakes answer
Q.8	A	1 Please 2 trees 3 sleepy 4 ready	$\frac{1}{2}$ mark to each correct answer
	B	1 Funniest 2 snuggles	1mark to each correct answer
	C	1.Alice jumped into the rabbit hole too. 2.There is a clock inside you.	1mark to each correct answer
	D	1.string 2.alarm 3. Scamper 4 .meadow	1 mark to each correct answer
Q.9	-	Give full marks if there is no any mistake	Deduct $\frac{1}{4}$ for a mistake

कक्षा - 4 हिंदी 2019-20 कुंजी

निर्देश - व्याख्यात्मक उत्तर की 4 गलतियों पर 1 अंक काटा जाए ।

व्याकरण मतलब 1 अंक वाले उत्तर में मात्रा दोष पर आधे अंक काटे जाएँ ।

अन्य सभी संभावित उत्तर पर भी स्वविवेक से अंक दिया जाए ।

प्रश्न.1 (क) बीरबल अकबर के दरबार में मंत्री थे ।

(ख) बीरबल की बुद्धि के आगे बड़े-बड़ों की भी कुछ नहीं चल पाती थी ।

(ग) दरबारी बीरबल को मुसीबत में फँसाना चाहते थे ।

(घ) खवाजा सरा को अपनी विद्या और बुद्धि पर बहुत अभिमान था ।

(च) खवाजा सरा बीरबल को निरा बालक और मूर्ख समझते थे ।

प्रश्न.2 (क) पापा जब छोटे थे तो उनसे अक्सर पूछा जाता था कि तुम बड़े होकर क्या बनना चाहते हो ।

(ख) पापा का जवाब हर बार अलग-अलग होता था ।

(ग) शुरू-शुरू में पापा चौकीदार बनना चाहते थे ।

(घ) छोटे

(च) भरोसा, विश्वास

प्रश्न.3 (1) दोनों मित्र शहर जा रहे थे ।

(2) दोनों मित्रों को जंगल में एक भालू आता दिखाई दिया ।

(3) सोनू ने पेड़ पर चढ़कर अपनी जान बचाई ।

(4) भालू ने जीतू को मरा हुआ समझा ।

(5) जीतू को पेड़ पर चढ़ने का मौका नहीं मिला इसलिए वह ज़मीन पर बैठ गया ।

(6) इस कहानी से सीख मिलती है कि जो मित्र मुसीबत में साथ छोड़ जाए ऐसे मित्रों से दूर रहना चाहिए ।

(7) परेशानी

(8) सवाल

(9) (क) मौका (ख) कान

प्रश्न.4 (क) बादल गरज-गरज कर ढोल बजाते होंगे ।

(ख) दिनेश की माँ कपड़े सिलने की मशीन चला रही होंगी ।

प्रश्न.5 (क) अधिक से अधिक वर्षा करके बादल नदी-नालों में बाढ़ लाते होंगे ।

(ख) अगर हम रेल से सफ़र करेंगे तो प्लेटफ़ार्म और रेलगाड़ी में पुलिस, टी. टी., मुसाफ़िर आदि लोग नज़र आएँगे ।

(ग) साल के जून, जुलाई या अगस्त के महीनों में ज़्यादा बादल छाते हैं ।

(घ) संन्यासी सीधे-सीधे शब्दों में भिक्षा माँगता तो राजा भिक्षा देने से मना कर देता ।

प्रश्न.6 और 7 स्वविवेक से

प्रश्न.8 (क) 1-चतुर, होशियार, अक्लमंद 2 - मूर्ख, नासमझ

(ख) स्वविवेक से

(ग) तिरंगा, दुपहिया (घ) पुराना, अन्य (च) मामी , चाची

(छ) टिप-टिप , पट-पट आदि (ज) वे बच्चों से ज़्यादा प्यार करते थे ।

(झ) सूप ,डलिया आदि

प्रश्न.9 अजनबियों, तिमंज़िली, महिला, क्रिकेट

प्रश्न.10 (क) गर्मी की छुट्टियाँ थीं ।

(ख) दिनेश क्या खोज रहा था ?

प्रश्न.11 शैतानी ज़िद्दी

प्रश्न.12 धरेगा, गढ़ती, बढ़ती

प्रश्न.13 दादी नानी

प्रश्न.14 स्वविवेक से

प्रश्न.15 खोलो टटोलो रोलो लहराओ

प्रश्न.16 पहले, एक दिशा

प्रश्न.17 स्वविवेक से

ATOMIC ENERGY CENTRAL SCHOOL**TERM –I (2019)****Class-IV****Maths****Section A**

A-1.	1 marks for each correct answer	
	a-ii	1000
	b-i	30
	c-iv	curved line
	d-i	twice
	e-ii	expiry
	f-ii	100
A-2	2 marks for each correct answer	
	a)	Railway station Airport
	b)	2 marks for each correct pattern
	c)	1 mark for correct number - watch 1 mark for correct time
	d)	5/9/2018 - 1 mark 2/10/2019 - 1 mark
	e)	correct naming - 1 mark correct length - 1 mark
A-3	1 mark for each correct answer	
	a	Bank
	b	Ankit's house
	c	market
	d	Raju's

Section B

B-1.	1 marks for each correct answer					
	a)-500	b)-2m	c)-8500 year old	d)-8	e)-999	f)-side
B-2	2 marks for each correct answer					
a	1. 13:40 hours			2. 7:30 O'clock in the morning		
b	i) 2			ii) 6		
c	½ mark for each correct leveling					
	200 ml	400 ml	600 ml	800 ml	1000 ml	
d	2 marks for correct view					
e	1 mark	Bholu is taller				
	1 mark	He is 16 cm taller than her				
B-3	1 ½ marks for correct steps in each question.					
	½ mark for each correct answer					

Section-C

C-1	Accept the correct answer. 1 mark for each. $\frac{1}{2}$ mark should be deducted fore incorrect unit.			
	a- 2000	b-5	c- 7 days	d- Rs. 120
C-2	2 marks for each correct answer 1 mark for correct steps 1 mark for correct answer			
	a	480 ml		
	b	1200 m		
	c	100 minutes = 1 hour 40 minutes		
	d	11 days (1 mark)		
		yes (1 mark)		
	e	i) 30 ml ii) 210 ml		
C-3	1 mark for each answer			
	i) 7200 Rs.	ii) 2800 Rs.	iii) 900 Rs.	iv) Old bricks

Section-D

D-1	Accept the correct answer. 1 mark for each			
	a) cuboid	b) 100 ml + 150 ml	c) Rs. 420	d) 40
D-2	Each question is for 2 marks. 1 mark for correct step. 1 mark for correct answer. $\frac{1}{2}$ mark will be deducted for incorrect units.			
	a)	Rs. 988		
	b)	960 m		
	c)	5 buses		
	d)	i)- June (1 mark) ii) Yes (1 mark)		
	e)	i) 18/02/2018 (1 mark) ii) February (1 mark)		
	f)	i) 165 L (1 mark) ii) 1,155 L (1 mark)		
D-3	Each correct answer carries 1 mark			
	a)	Deluxe bus		
	b)	Ordinary bus and Luxury car		

CLASS-IV/EVS/TERM-1/2019

SECTION-A (30 Marks)

I. A. Fill in the blanks. (Award 1 mark for each correct answer.) (5X1m=5m)

(a) oldest (b) February (c) 2000 (d) Valiyamma (e) Nazli's

B. State whether True or False.(Award 1 mark for each correct answer.) (5X1m=5m)

(a) False (b) False (c) True (d) True (e) False

C. Find out the given place in word grid and circle them. (5X1m=5m)

(Award 1 mark for each correct answer.)

(i) Ahmedabad (ii) Kannauj (iii) Khejadli (iv) Kerala (v) Goa

D. Write short answers. (5X2m=10m)

(1) Ears cannot be seen- any bird name, frog, lizard etc. (½ mark for each right example.)

Has hair on skin- bear, cow, horse etc. (any other right answer will be accepted.)

(2) (a) Herd (b) 100 kg leaves and twigs (1 mark for each part)

(3) (a) Madhubani (b) natural colours made by leaves and flowers (1 mark for each part.)

(4) birth, death, transfer, marriage of any family member (1 mark for each reason)

(accept any other right answer.)

(5) (a) 820-6449755 (b) 9037 (c) 3 (d) 24-12-2006. (½ mark for each right answer.)

E. Write 5 sentences on Khejadi Tree. 5M

Ans.(i) mainly found in desert area (ii) bark used for making medicine (iii) people cook and eat its fruits (iv) wood will not be affected by insects (v) can grow without much water
or

(i) She is a weight lifter . (ii) father is a police constable. (iii) starting weightlifting at the age of 12 years. (iv) can lift weight upto 130 kg. (v) She has won 29 medals in international events. (vi) lives in Andhra Pradesh. (1 mark for each correct sentence.) (accept any other correct and relevant answer.)

SECTION-B (25 Marks)

II.A. Identify the pictures and write the names. (5X1m=5m)

(a) Honeybee (b) Sunflower (c) Tunnel (d) Camel cart (e) Coconut Tree (1 mark for each right answer)

B. Give two examples for each. (½ mark for each example.) (5X1m=5m)

(1) rose, mogara (2) ant , termite, honeybee, wasp (3) money plant, grass, mushroom

(4) neem , keekar, khejadi (5) lawn tennis, badminton, volleyball (accept any other right answer.)

C. Give reasons.**(2x2=4m)**

1. because of hunting, deforestation.
2. many people did not switch off the engines of their vehicles while waiting at level crossing.

D. Write short answers.**(3x2m=6m)**

- (i) make beehive, collect nectar, look after baby bees.
- (ii) Bamboo bridge- weak, few people can cross in one time, made by bamboo and rope
Cement bridge- strong, many people can cross, made by cement, iron rod etc ($\frac{1}{2} + \frac{1}{2} + \frac{1}{2} + \frac{1}{2}$)
- (iii) First day- hot and dry weather, brown and dry fields Second day- pleasant weather, green fields and red soil. (1m + 1m)

E. Write the work of :-**(1X5m=5m)**

- (i) make furniture and wood work. (ii) build structure of a house or building including walls by using cement, bricks etc. (iii) check our tickets and see that we are sitting on our proper seat or not. (iv) give training , tell rule and regulations of the game, give instructions to players etc. (v) carries load and luggage of people from one place to other. **(1 mark for each correct answer.)**

(Accept any other relevant answer.)

SECTION-C (25 Marks)**III.A. Circle the odd one out.****(5X1m=5m)**

- (a) snake (b) frog (c) mouse (d) lotus (e) Goa **(1 mark for each correct answer.)**

B. Match the following places with their states.**(5X1m=5m)**

- (a) Rajasthan (b) Bihar(c) Haryana (d) Gujarat (e) Karnataka **(1 mark for each correct answer.)**

C. Write short answers.**(5X2m=10m)**

- (i) King's men come to village to cut the trees to build the king's palace.
- (ii) Anita arranged money for bee keeping by teaching the young children.
- (iii) Any 2 right reason. **(1+1)**
- (iv) Girl Star is a project that tells the story of girls who changed their life by going to school.
- (v) **1 ½ marks for drawing + ½ marks for name.**

D. Locate and shade the following state on the map.**(1X5m=5m)**

1 mark for each correct shading.