

ATOMIC ENERGY CENTRAL SCHOOL No.-4, RAWATBHATA

Periodic Test – 1 (2018-19)

Subject : English

Class – III

Section : _____

Date: 16/07/2018

Name of the student : _____

Roll No: _____

Invigilator's sign: _____

Time - 1 $\frac{1}{2}$ Hours

Examiner's sign: _____

MM : 40 MO : _____

Q.1 Read the following poem and answer the questions.

5

Good morning, sky;
Good morning, sun;
Good morning, little winds that run!
Good morning, birds;
Good morning, trees;
And creeping grass, and brownie bees!
How did you find out it was day?
Who told you night had gone away?
I am wide awake;
I am up now, too.
I will be right out to play with you!

1. Why in the poem child is Happy?

2. What does the child want to do?

3. To whom does the child say "Good Moring" ?

4. Write rhyming words for following. (eg. too – you)

A. Sun - _____ B. Tree - _____ c. Day - _____

Q.2 (A) What do you see around you during the day and at night ? 2

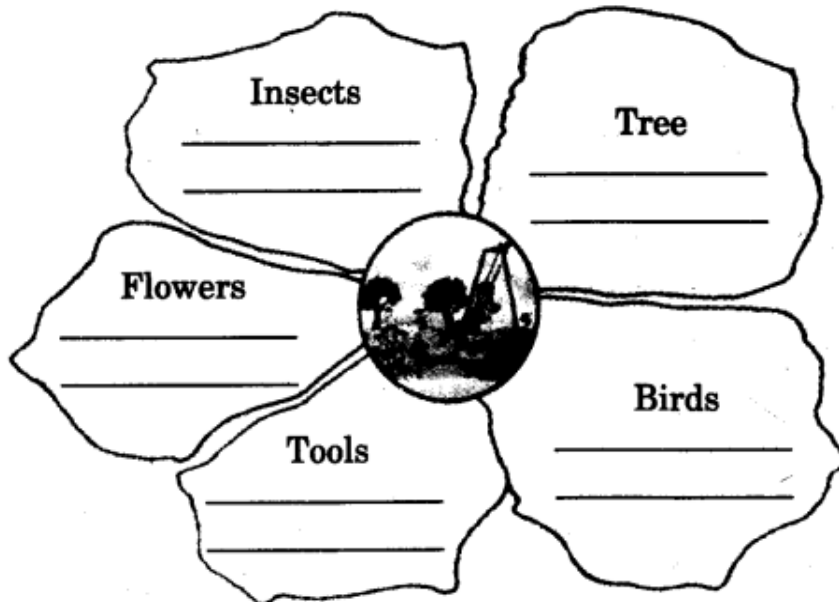
Day

Night

Q.2 (B) Complete the following words. 3

1. Hap ___ ___ ily 2. M ___ gic 3. Mor ___ ___ ng
4. Fe ___ ___ her 5. Bir ___ 6. Spa ___ ___ ow

Q.3 Name two words in each petal which you see in a garden 4



Q. 4 Answer the following questions. 6

1. Name the flowers growing in the garden?

2. Why was there great joy in Nina's house?

3. Why was nina worried?

Q.5 Re-write the jumbled story carefully in proper order.

4

1. Mother ask why.
2. Nina does not want to leave the baby sparrows alone.
3. Nina is sad
4. Nina is happy again
5. Mother says "we will leave the window open"

Q.6 Contraction of words. (eg. I am = I'm)

2

- | | | | |
|-------------|-------|--------------|-------|
| 1. Do not= | _____ | 2. Can not = | _____ |
| 3. Let us = | _____ | 4. It is = | _____ |

Q. 7 Arrange the words into a meaningful sentence.

4

1. help / mother / her / Radha

2. is / eating / Rama / apple / an

3. itteligent / Rishi / an / boy / is

4. bought / new / a / dress / Beenu

D) Write the opposite of

4

- | | | | |
|-----------|---------|----------|---------|
| a) Pretty | - _____ | b) Happy | - _____ |
| c) good | - _____ | d) white | - _____ |


Q.8 Draw your favourite bird and colour it.

3



8 (B) Name the following flowers and colour it.

3





परमाणु ऊर्जा केंद्रीय विद्यालय क्र. - 4, रावतभाटा

प्रथम सामयिक परीक्षा (2018-19)

विषय : हिन्दी

कक्षा – तीसरी

अनुभाग : _____

दिनांक : 19/07/2018

विद्यार्थी का नाम : _____

अनुक्रमांक : _____

निरीक्षक के हस्ताक्षर : _____

समय : 90 मिनट

परीक्षक के हस्ताक्षर : _____

पूर्णांक : 40 प्राप्तांक : _____

प्र.1 निम्न प्रश्नों के उत्तर दो ।

(क) इनके पास तुमने अक्सर किन-किन को उड़ते-मँडराते देखा है ? 2

• जलते बल्ब के आसपास - _____

• खेतों में - _____

(ख) कहानी के हिसाब से लिखो । 2

समझदार- _____ आलसी - _____

चतुर - _____ घमंडी - _____

(ग) निम्न नामों को वर्णमाला क्रम से लिखो । 2

मोहन राजू पवन अमर

(घ) शब्दों को ठीक करके लिखो । 2

प्रणम - _____ लेकीन - _____

कोशीश - _____ सूबह - _____

(ङ) घर की सफाई के लिए किन-किन चीज़ों का इस्तेमाल होता है ? 2

(च) चार खेलों के नाम लिखो जिनमें दो टोलियाँ खेलती हों । 2

(छ) इन वाक्यों को अपने ढंग से लिखकर बताओ । 2

- शेर आग-बबूला हो उठा ।

- उसकी ज़रा खबर लो न ।

(ज) शेर ने भोजन में क्या खाया होगा ? 2

(झ) दिए गए शब्दों का वाक्यों में प्रयोग करो । 2

- हिम्मत - -----
- घमंड - -----

(ञ) बूढ़ी अम्मा के घर के दो काम लिखो । 2

(ट) कविता की पंक्तियाँ पूरी करो । 2

कोयल माने मिसरी जैसी

----- जिसकी बोली

यह तो जाता ----- करो जब

इससे ----- ठिठोली

इसीलिए तो कभी-कभी -----

कहते इसको भक्कू ।

(ठ) किसी-किसी को नीचे दिए गए नामों से क्यों बुलाया जाता होगा ? 2

○ भोली =

○ छुटकी =

प्र.2 (क) सफ़ाई के काम से जुड़े हुए शब्द सोचो और लिखो । जैसे - झाड़ना 2

(ख) काम वाले और नाम वाले शब्द दिए गए हैं । उन्हें छाँटकर नीचे लिखो । 2

खाना बनाना

चाँद

अम्मा

पानी लाना

नाम वाले शब्द	काम वाले शब्द
.....
.....

(ग) तुम खाना खाकर क्या करते हो ? 2

अक्सर -

कभी-कभी -

(घ) कब-कब ऐसा होता है, जब तुम्हें कोई घूरकर देखता है ? 2

मेरे पिता -

मेरे शिक्षक -

प्र.3 दिए गए प्रश्नों के उत्तर लिखो ।

(क) कक्कू कोयल जैसा क्यों नहीं है ? 2

.....

.....

.....

(ख) बूढ़ी अम्मा चाँद पर क्यों चढ़ गई होगी ?

2

(ग) चाँदवाली अम्मा झाड़ू क्यों नहीं छोड़ना चाहती थीं ?

2

प्र.4 सुलेख लिखो ।

2

अम्मा अब झाड़ू नहीं छोड़ सकती थी ।



ATOMIC ENERGY CENTRAL SCHOOL No.-4, RAWATBHATA
Periodic Test – 1 (2018-19)

Subject : Maths

Class – III Section : _____ Date: 18/07/2018
Name of the student : _____ Roll No: _____
Invigilator's sign: _____ Time - $1\frac{1}{2}$ Hours
Examiner's sign: _____ MM : 40 MO : _____

I. Match the following.

(5)

200 + 10 + 9	*	*	88
4 + 100 + 20	*	*	550
900 + 6	*	*	424
80 + 8	*	*	219
500 + 50	*	*	906

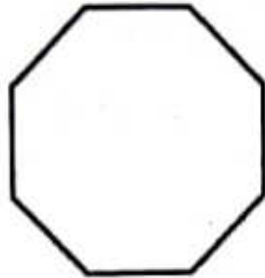
2. Draw the side view and front view of the following.

(4)

Things	Top View	Side view
Car		
Cooker		

3. Using a dotted line, divide the following pictures into two similar halves.

(2)



4. Do as directed.

(2)

a) Jump 5 steps forward:

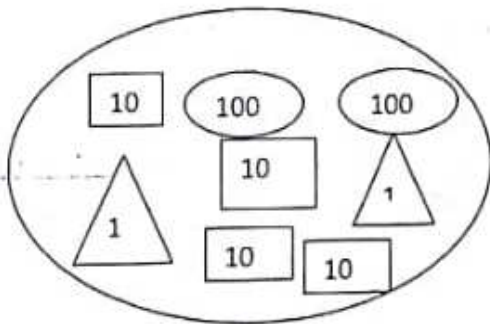
205, 210, 215, _____, _____, _____, _____

b) Jump 10 steps backward:

400, 390, 380, _____, _____, _____, _____


5. Write the value.

(1)



6. From where you have to look to see the things this way?

(3)



7. Continue the pattern.

(4)

a) 220, 230, 240, 250, _____, _____, _____, _____

b) 117, 217, 317, 417, _____, _____, _____, _____

c) 500, 550, 600, 650, _____, _____, _____, _____

d) 372, 370, 368, 366, _____, _____, _____, _____

8. Write in words.

(2)

a) 560 - _____

b) 888 - _____

9. Write in figures.

(2)

One hundred seventeen - _____

Nine hundred twelve - _____

Six hundred one - _____

Seven hundred fifty - _____

10. Find the sum .

(5)

$$\text{a) } 75 + 23 = \square + \square + \square \quad \square$$

$$= \square + \square + \square$$

$$\square + \square$$

$$= \square$$

$$\text{b) } 45 + 18 = \square + \square + \square \quad \square$$

$$= \square + \square + \square$$

$$= \square + \square$$

$$\square$$

11. Work out four different ways to write the numbers.


(4)

82
_____ + _____
_____ + 14
25 + _____
_____ + _____

108
_____ + _____
90 + _____
_____ + _____
_____ + 38


12. Draw the mirror half of each letter.

(2)




13. How many are these?

(2)



Rs



14. A school library had 652 books. 400 more books are bought.
How many books are there in all?

(2)



ATOMIC ENERGY CENTRAL SCHOOL No.-4, RAWATBHATA

Periodic Test – 1 (2018-19)

Subject : EVS

Class – III **Section : _____**

Date: 17/07/2018

Name of the student : _____

Roll No: _____

Invigilator's sign: _____

Time - 1 $\frac{1}{2}$ Hours


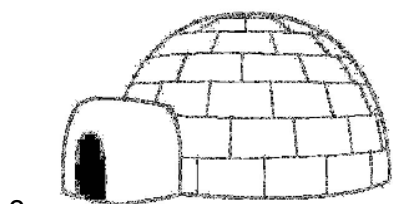
Examiner's sign: _____

MM : 40 MO : _____

Q1: Observe the picture and write their names:

1X4=4





Q2: Answer the following Questions :

a) How do you help your family ?

2X2=4

b) Name any two man-made and two natural sources of water.

Man-made resources: 1. _____ 2. _____

Natural resources: 1. _____ 2. _____

Q3 :Classify the following as –

1X4=4

mammals , birds , insects and reptiles:

COW , SNAKE , PARROT , HOUSEFLY , EAGLE , TIGER , BEE , LIZARD

MAMMALS	BIRDS	INSECTS	REPTILES

Q4 : Do as directed :

3X2=6

I. Name any four parts of your house

II. Name any two guests of your house that are

a) invited : _____

b) uninvited : _____

III. Match the following:

- | | |
|--------------------|--------------------------|
| a) Igloo | Man made source of water |
| b) Tongue | House made up of ice |
| c) Well | Mother |
| d) Sister's Mother | To taste food |

Q5 : State whether the following statements are true or false

1X4=4

- a) Vande Matram is the National Anthem of India ()
- b) Is your Family called your First School ()
- c) Dog can walk and run ()
- d) Snake and Frog both can live in water as well as on land ()

Q6 : Draw the containers used to store water in your house and write their names. 1X5=5

1. _____	2. _____
----------	----------

Q7 : Answer the following:

6X1=6

a) Name any two insects that are found on the flowers

b) Who is the head of your family?

c) Is there any part of your House where a particular family member never goes or goes for a short time?

d) Write the names of some rivers that you know

i. _____ ii. _____

e) Name any two animals that can hop.

f) Write any two uses of water.

Q8 : Look at the pattern and answer carefully:

2X2=4

I. As UNCLE is related to AUNT, similarly

a) Father is related to _____

b) Brother is related to _____

II. Name the type of house which is made up of

a) Mud and dried grass : _____

b) Ice : _____

Q9 : Put a **O (Circle)** around one that is different from the others

3X1=3

I. River, Mountain, Lake, Pond, Spring

II. Fish, Duck, Monkey, Crocodile, Tortoise

III. Car, Boat, Bus, Train, Bicycle